


**SOF INTERNATIONAL GENERAL
KNOWLEDGE OLYMPIAD**

Total Questions : 50

Time : 1 hr.

PATTERN & MARKING SCHEME

Section	(1) General Awareness	(2) Current Affairs	(3) Life Skills	(4) Achievers Section
No. of Questions	30	10	5	5
Marks per Ques.	1	1	1	3



Scan the QR code for more details.

SYLLABUS

Plants and Animals, India and the World, Science and Technology, Earth and Its Environment, Universe, Language and Literature, Entertainment, Social Studies, Sports, Quantitative Aptitude and Reasoning, Current Affairs, Life Skills (Empathy, Effective Communication, Critical Thinking, Creative Thinking, Coping with Stress, Decision Making, Problem Solving, Interpersonal Skills, Managing Emotions, Self-awareness).

Achievers Section : Higher Order Thinking Questions from the above given Syllabus.

1. Identify the given award name and the field in which it is given.



- (A) Param Vir Chakra-Highest Military Award
 (B) Major Dhyan Chand Khel Ratna Award-Award for Lifetime Achievement in Sports and Games
 (C) Sahitya Akademi Award-Literary Honour given for Outstanding Work in Literature
 (D) None of these

2. Which part of the flower turns into fruit?

- (A) Ovary (B) Ovules
 (C) Petal (D) Corolla

3. Which of the following is/are biodegradable?

- (A) The food we eat
 (B) The peel of fruits and vegetables
 (C) Jute bag
 (D) All of these

4. Who among the following was nick named 'Flying Sikh' by General Ayub Khan?

- (A) Jawaharlal Nehru (B) Sardar Patel
 (C) Pargat Singh (D) Milkha Singh

5. The headquarters of WHO is located in _____.

- (A) London, England
 (B) Geneva, Switzerland
 (C) Brisbane, Australia
 (D) Madrid, Spain

- 6.



What is a common character of the above shown animals?

- (A) They all live in water.
 (B) They all lack backbone.
 (C) They all have scales on their body.
 (D) They all lay eggs to reproduce.

7. Seismograph is associated with which of the following natural calamities?

- (A) Tornado (B) Earthquake
 (C) Flood (D) Forest fire

8. How many active players are there in the basketball court from each team at a time?

- (A) 11 (B) 6
 (C) 5 (D) 7

ACHIEVERS SECTION

9. Identify the name of the given yogasana.



- (A) Tadasana (B) Halasana
 (C) Pranayama (D) Bhujangasana

10. Which of the following statements is true?

- (i) The least number which should be added to 2497 so that the sum is exactly divisible by 3, 4, 5 and 6 is 23.
 (ii) 52168 is divisible by 11.
 (A) Both (i) and (ii)
 (B) Only (i)
 (C) Only (ii)
 (D) Neither (i) nor (ii)



SOF INTERNATIONAL
ENGLISH OLYMPIAD

Total Questions : 50

Time : 1 hr

PATTERN & MARKING SCHEME

Section	(1) Word and Structure Knowledge	(2) Reading	(3) Spoken and Written Expression	(4) Achievers Section
No. of Questions	30	10	5	5
Marks per Ques.	1	1	1	3



Scan the QR code for more details

SYLLABUS

Section - 1 : Nouns, Pronouns, Verbs, Adverbs, Adjectives, Articles, Conjunctions, Prepositions, Punctuation and Jumbled Words, Tenses, Voices, Narration, etc., Spellings, Collocations, Phrasal verbs, Idioms, Synonyms, Antonyms.

Section - 2 : Search for and retrieve information from various text types like News headlines, Brochures, Formal and Informal letters, Itinerary, etc., Acquire broad understanding of and look for specific information in Short narratives, Time-tables, News stories, Diary entry, Poster Making, Messages, etc.

Section - 3 : Ability to understand situation-based variations in functions like agreement and disagreement, Requests, Refusals, Apologies, etc.

Section - 4 : Higher Order Thinking Questions - Syllabus as per Sections 1, 2 and 3.

WORD AND STRUCTURE KNOWLEDGE

Direction (Q.No. 1 and 2) : Choose the best word/phrase to complete each sentence.

- What's all that noise? What's _____?
(A) occurring (B) happening
(C) going (D) playing
- When you were a child, _____ to England every year for your holidays?
(A) have you gone (B) did you go
(C) are you going (D) were you going

- How many words are wrongly spelt in the sentence below?
The nurse wraped a bandege round his head.
(A) 1 (B) 2
(C) 3 (D) None

The nurse wraped a bandege round his head.
(A) 1 (B) 2
(C) 3 (D) None

- What does 'it slipped my mind' mean?
(A) Forgot to do something
(B) Just remember to do something
(C) Something went passed my head
(D) Cannot understand anything

READING

Direction (Q. No. 5 and 6) : Read the passage and answer the following questions.

Childhood

Most people believe that the best time of one's life is childhood. There are a few responsibilities and no bills to worry about. A child does not have to worry about getting a job, making a successful career or doing the household chores.

This enables a child to have lots of free time that they can devote to play, which can build up their creativity. This can give children a life that is filled with excitement and new happenings. Having said this, there are times when children might find it difficult to buy all the things

they want with the insufficient pocket money they get. Adults surely have less restrictions in a few things, when compared to a child.

- According to the passage, a child does not have to worry about doing the _____.
(A) household chores
(B) homework
(C) taxes
(D) accounts
- Adults have less _____.
(A) independence
(B) bills
(C) restrictions
(D) restricted behaviour

SPOKEN AND WRITTEN EXPRESSION

Direction (Q. No. 7 and 8) : Choose the most suitable answers.

- Rob: Have you ever eaten something unusual?
Bob: Yes, _____.
(A) I have (B) They have
(C) I got (D) I do have
- Kapil : Hey Nitin, I'm free now, my friend. What do you want?

Nitin : _____

- It could be very kind of you to get me some bread
- I may be grateful if you would get me some bread
- Do me a favour, will you? Get me some bread
- I shall really appreciate if you shall get me bread

ACHIEVERS SECTION

Direction (Q. No. 9 and 10) : Choose the best option to complete the sentences.

9. Grace : I know you are hiding something from me. Tell me.
Hamid : Yes there is something I need to tell you and _____.
- (A) break the ice
(B) give you a cold shoulder

- (C) get it off my chest
(D) make a long story short

10. I ran quickly and _____ cross the field easily, even though it was muddy.
- (A) is able to
(B) may
(C) can
(D) was able to



**SOF NATIONAL
SCIENCE OLYMPIAD**

Total Questions : 50

Time : 1 hr.

PATTERN & MARKING SCHEME			
Section	(1) Logical Reasoning	(2) Science	(3) Achievers Section
No. of Questions	10	35	5
Marks per Ques.	1	1	3



Scan the QR code for more details

SYLLABUS

Section - 1 : Verbal and Non-Verbal Reasoning.


Section - 2 : Motion and Measurement of Distances, Light, Shadows and Reflections, Electricity and Circuits, Fun with Magnets, Air Around Us, Sorting Materials into Groups, Separation of Substances, The World of Living (Characteristics of Living Beings, Parts of Plants, Body Movements in Animals and Adaptation), Components of Food.

Section - 3 : Higher Order Thinking Questions - Syllabus as per Section - 2.

LOGICAL REASONING

1. X is to the South-West of Y, L is to the East of X and South-East of Y and M is to the North of L in a line with XY. In which direction of Y is M located?
- (A) South
(B) South-West
(C) North
(D) North-East

- (A) +
(B) ⊗
(C) ⊕
(D) ⊙



2. Which of the following figures will complete the given figure matrix?

3. If all the vowels are removed from the series given below, then which of the following is ninth to the right of twelfth letter from the right end?


QEEEFEBULAMCDIPQORRRAPPWI

- (A) R (B) W
(C) I (D) P

SCIENCE

4. Read the following passage carefully.
P is found abundantly in cod liver oil and is important for visual efficiency. Q is sourced from amla, tomato and citrus fruits and its deficiency may cause wounds to take longer time for healing. R is formed in our body in presence of sunlight and its deficiency in toddlers may cause deformity of legs. Now select the incorrect option regarding this.
- (A) P can be found in spinach but not R.
(B) In absence of R our body will show calcium deficiency even if it is abundant in our food.
(C) Q is also called B-complex as many of its varieties are available.
(D) P cannot be dissolved in water.

5. Which of the following joints is present between thigh bone and shin bone?
- (A) Hinge joint (B) Pivot joint
(C) Fixed joint (D) Ball and socket joint
6. A small compass is placed beside the middle of a bar magnet.



In which direction will the compass needle point?

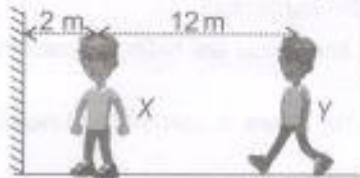
- (A) ⊖ (B) ⊕
(C) ⊙ (D) ⊗

7. Three glasses *P*, *Q* and *R* having equal amount of water were taken and equal amount of salt was added to each one of them. After that, *P* was cooled, *Q* was heated and *R* was left undisturbed. Water in which glass will now taste most salty?



- (A) *P*
 (B) *Q*
 (C) *R*
 (D) All will taste the same.

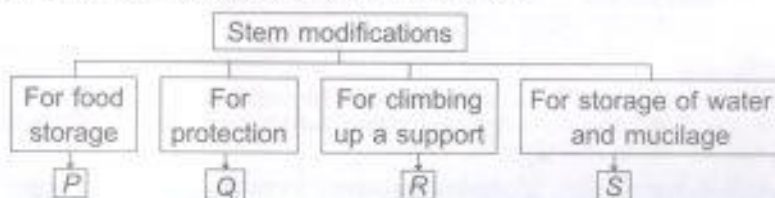
8. Two boys are standing in front of a plane mirror as shown in the given figure. If boy *Y* walks 5 m towards boy *X*, then how far away would boy *Y* appear to be in the mirror to boy *X*?



- (A) 9 m
 (B) 10 m
 (C) 11 m
 (D) 14 m

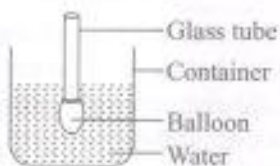
ACHIEVERS SECTION

9. Study the given classification chart and identify plants *P*, *Q*, *R* and *S*.




- | <i>P</i> | <i>Q</i> | <i>R</i> | <i>S</i> |
|----------------------|----------------------|-------------------|----------------|
| (A) <i>Dahlia</i> | <i>Barberry</i> | <i>Gloriosa</i> | <i>Aloe</i> |
| (B) <i>Zamikand</i> | <i>Bougainvillea</i> | <i>Grapevine</i> | <i>Opuntia</i> |
| (C) <i>Asparagus</i> | <i>Citrus</i> | <i>Pea</i> | <i>Aloe</i> |
| (D) <i>Ipomoea</i> | <i>Rose</i> | <i>Nasturtium</i> | <i>Opuntia</i> |

10. A balloon attached to a hollow glass tube was submerged in a container of water as shown here. Rohan



placed his mouth over the open end of the glass tube and blew air into it. He observed that the water level in the container rose. This experiment tells us that air _____.

- (i) has mass
 (ii) occupies space
 (iii) has a definite volume
 (iv) can be compressed
 (A) (i), (ii) and (iv) only
 (B) (ii) and (iii) only
 (C) (i) and (ii) only
 (D) (ii) only



SOF INTERNATIONAL
 MATHEMATICS OLYMPIAD

Total Questions : 50

Time : 1 hr.

PATTERN & MARKING SCHEME				
Section	(1) Logical Reasoning	(2) Mathematical Reasoning	(3) Everyday Mathematics	(4) Achievers Section
No. of Questions	15	20	10	5
Marks per Ques.	1	1	1	3



Scan the QR code
 for more details

SYLLABUS

Section - 1 : Verbal and Non-Verbal Reasoning.

Section - 2 : Knowing Our Numbers, Whole Numbers, Playing with Numbers, Basic Geometrical Ideas, Understanding Elementary Shapes, Integers, Fractions, Decimals, Data Handling, Mensuration, Algebra, Ratio and Proportion.

Section - 3 : Syllabus as per Section - 2.

Section - 4 : Higher Order Thinking Questions - Syllabus as per Section - 2.

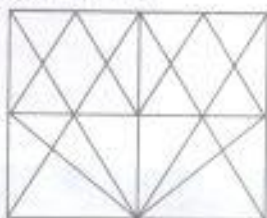
LOGICAL REASONING

1. Find the next term in the series given below.

3F, 6G, 11I, 18L, ?

- (A) 21O (B) 25N
(C) 27P (D) 27Q

2. Find the minimum number of straight lines required to draw the given figure.



- (A) 15 (B) 16
(C) 14 (D) 17

3. How many dots lie opposite to the face having four dots, when the given net of cube is folded?



- (A) 2 (B) 1
(C) 5 (D) 6

MATHEMATICAL REASONING

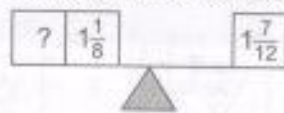
4. The given table shows the temperature of a city for 7 consecutive hours.

Hour	1	2	3	4	5	6	7
Temperature (°C)	-6	15	-2	23	12	0	-4

Calculate the difference between the highest and the lowest temperature of the city over the 7 hour period.

- (A) 17°C
(B) 29°C
(C) 21°C
(D) 25°C

5. To balance the scale, find the missing fraction.



- (A) $\frac{11}{24}$ (B) $\frac{10}{24}$
(C) $\frac{5}{24}$ (D) $\frac{1}{24}$

6. Evaluate :

$$-1 + 55 - (-29) + (-1) - (-82) + (-3)$$

- (A) 161 (B) -161
(C) 158 (D) -158

EVERYDAY MATHEMATICS

7. On a hill, the temperature at 8 p.m. was 2°C but at the mid-night of the same day, it fell down to -3°C. By how many degrees did the temperature fall?

- (A) 6°C (B) 5°C
(C) 2°C (D) 3°C

8. Vishal jogged around a rectangular field 4 times. If the rectangular field was 135 m long and 78 m wide, then how far did Vishal jog?

- (A) 426 m (B) 852 m
(C) 1278 m (D) 1704 m

ACHIEVERS SECTION

9. Figure P is made up of six identical squares. Two squares were removed from figure P to form figure Q. The perimeter of figure P is 240 cm. What is the perimeter of figure Q?

- (A) 220 cm
(B) 180 cm
(C) 200 cm
(D) 160 cm

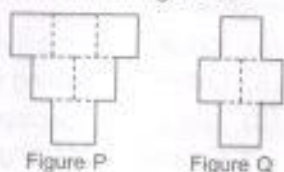


Figure P

Figure Q

10. Find the value of $\left(\frac{P+Q}{R}\right) \times S$.

- (i) 100 lakhs = Q millions
(ii) R crores = 100 millions
(iii) 100 thousands = P lakhs
(iv) 10 crores = S millions
(A) 10 (B) 100
(C) 110 (D) 1

PATTERN & MARKING SCHEME				
Section	(1) Logical Reasoning	(2) Computer Science	(3) Information Technology	(4) Achievers Section
No. of Questions	10	30	5	5
Marks per Ques.	1	1	1	3



Scan the QR code for more details

SYLLABUS

Section – 1 : Verbal and Non-Verbal Reasoning.

Section – 2 : History and Generation of Computers, Types of Computers, MS-Windows 10, MS-Word/Working with Charts and Tables, Using Layout tab, Arranging multiple windows of a document, MS-PowerPoint/Creating presentation using Animation, Working with Animations and Transitions, Creating new slides using Slides pane, Working with Handouts and Notes Master, Arranging multiple windows of a presentations, Working with Charts and Tables), Networking and Cyber Safety, Introduction to QBASIC, Hardware, Software, Input & Output Devices, Memory & Storage Devices.

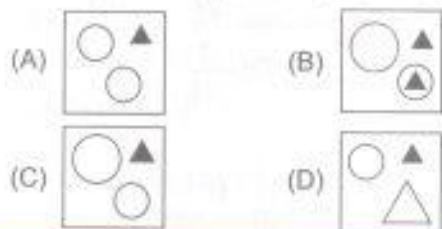
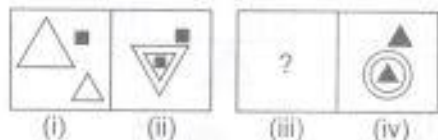
Section – 3 : AI, Robotics, IT Gadgets, Devices, Apps, Computerization, and other Developments in the Field of IT.

Section – 4 : Higher Order Thinking Questions - Syllabus as per Sections 2 and 3.

Questions are based on Windows 10 and MS-Office 2016.

LOGICAL REASONING

1. There is a certain relationship between fig. (i) and (ii). Establish the same relationship between fig. (iii) and (iv) by selecting a suitable figure from the options which will replace the (?) in fig. (iii).



2. Which of the following options will complete the given pattern?

E22, J17, O12, ?

- (A) S7 (B) T5
(C) T7 (D) T6

3. Ayan walks 20 m North from his house, turn right and walks 10 m, turns left and walks 15 m to reach his grandfather's house. In which direction is his grandfather's house from his house?
(A) South-West
(B) North-East
(C) East
(D) North

COMPUTER SCIENCE

4. Which of the following memory does not store data permanently?

- (A) Hard disk (B) CD
(C) ROM (D) RAM

5. Identify the given icon with respect to windows 10.

- (A) File Explorer
(B) Recycle Bin



- (C) Start Menu
(D) This PC

6. _____ tab of MS-Word 2016 allows you to set the page formatting options.

- (A) Home
(B) Insert
(C) Design
(D) Layout

INFORMATION TECHNOLOGY

7. Which of the following is/are available by default in Windows 10?

- (A) Cortana
(B) Microsoft Edge
(C) iTunes
(D) Both (A) and (B)

8. The given image is of _____ which is an android _____.

- (A) Kitkat, operating system
(B) Lollipop, operating system
(C) Jelly Bean, operating system
(D) Cupcake, operating system



ACHIEVERS SECTION

9. What would be the output of given QBasic code if user enters the value of A = 10 and B = 20?

```
CLS
INPUT A
INPUT B
SUM = A + B
Avg = SUM/2
PRINT "SUM="; SUM
PRINT "Average="; Avg
```

- (A) SUM= 30 (B) A = 10
Average= 15 B = 20
SUM = 40
Average = 10

- (C) A = 10 (D) SUM = 30
B = 20 Avg = 15
SUM = 30
Average = 10

10. Transition effect deals with the entrance and exit of a slide in a slide show. Which of the following categories of Transitions is depicted in the given image of MS-PowerPoint 2016?



Dissolve



Checkerboa...




Blinds



Clock

- (A) Subtle
(B) Exciting
(C) Dynamic Content
(D) Static Content



**SOF INTERNATIONAL
SOCIAL STUDIES OLYMPIAD**

SYLLABUS

Section - 1 : History – Studying the Past, The Early Humans, The First Cities and the Vedic Age, The Early Kingdoms and New Ideas, The First Empire – The Maurya, Life in Towns and Villages, New Empires and Kingdoms, Culture and Science.

Section - 2 : Geography – Planet Earth, its Major Domains and Landforms, Globes and Maps, Our Country – India (Physical and Political Divisions, Climate, Vegetation and Wildlife)

Section - 3 : Social and Political Life – Diversity and Discrimination, Government and Key Elements of a Democratic Government, Local Government and Administration, Livelihoods – Rural and Urban

Section - 4 : Higher Order Thinking Questions-Syllabus as per Section – 1, 2 & 3.

Total Questions : 50

Time : 1 hr.

PATTERN & MARKING SCHEME

Section	(1) History	(2) Geography	(3) Social and Political Life	(4) Achievers Section
No. of Questions	20	15	10	5
Marks per Ques.	1	1	1	3



Scan the QR code for more details

1. Planet 'X' is a cold and dry planet having two satellites – Phobos and Deimos. Which planet is 'X'?

- (A) Mercury (B) Venus
(C) Mars (D) Neptune

2. Which of the following cities is not situated on the banks of river Ganga?

- (A) Haridwar (B) Agra
(C) Allahabad (D) Kanpur

3. It is a blanket-like layer that surrounds the Earth. It contains a mixture of gases including oxygen, which most organisms need to breathe. It protects us from the harmful radiations of the Sun. What is this layer called?

- (A) Hydrosphere (B) Geosphere
(C) Atmosphere (D) Lithosphere

4. The southern part of the western coastal plain is called _____.

- (A) Konkan Coast (B) Northern Circars
(C) Minicoy (D) Malabar Coast

5. The script of the Harappans was _____.
- (A) Roman (B) Latin
(C) Brahmi (D) Pictographic

6. The pipal tree under which Gautam Buddha attained enlightenment, came to be known as

- (A) Dharmachakra Vriksha
(B) Ashtangika Marga
(C) Bodhi Vriksha
(D) Bodhisattvas

7. Who takes care of the land records at the village level?

- (A) Patwari
(B) District Collector
(C) Chowkidar
(D) Tehsildar

8. Municipal Corporations issue _____ to people to run their business in cities. (A) Licenses (B) Money (C) Areas (D) All of these

ACHIEVERS SECTION

9. Which of the following statements are correct?
 (i) As we move away from the equator, the size of the parallels of latitude decreases.
 (ii) The zone which receives the maximum heat is called the temperate zones.
 (iii) In India, the longitude of $82\frac{1}{2}^\circ$ is E is treated as the standard meridian.
 (iv) The Earth has been divided into twelve time zones of one hour each.
 (A) (ii) and (iv) only
 (B) (i) and (iii) only
 (C) (ii) and (iii) only
 (D) (i) and (iv) only
10. Match column I with column II and select the correct option.
- | Column I | | Column II | |
|---------------------|-------------------------------------|---------------------|---------------------------|
| (P) Small-scale map | (i) Small area with greater details | (Q) Large-scale map | (ii) Roads and railways |
| (R) Thematic map | (iii) Map of large regions | (S) Physical map | (iv) Mountains and rivers |
- | P | Q | R | S |
|-----------|-------|-------|-------|
| (A) (i) | (ii) | (iii) | (iv) |
| (B) (iv) | (iii) | (ii) | (i) |
| (C) (iii) | (i) | (ii) | (iv) |
| (D) (ii) | (iv) | (i) | (iii) |



कुल प्रश्न-50

समय-1 घंटा

पेटर्न तथा अंक योजना			
खंड	(1) शब्द और व्याकरण बोध	(2) रचनात्मक बोध	(3) मेधावी खंड
प्रश्नों की संख्या	35	10	5
अंक प्रति प्रश्न	1	1	3



Scan the QR code for more details

पाठ्यक्रम

- खंड-1: भाषा-विचार, वर्ण-विचार, शब्द-विचार, संधि एवं समास, शब्द-भंडार, उपसर्ग एवं प्रत्यय, संज्ञा, सर्वनाम एवं विशेषण, काल, क्रिया एवं कालक, लिंग एवं वचन, अविकारी शब्द, अनुसृष्टि, संश्लेषण और विराम-चिह्न, गिनती, यहीनी के नाम, भारतीय साहित्य एवं संस्कृति।
 खंड-2: अपठित गद्यांश, अपठित पद्यांश, मुहावरें एवं श्लोकवैभव।
 खंड-3: उच्चतर क्रम सेच कौशल अधीन प्रश्न- खंड 1 और 2 के पाठ्यक्रम के अनुसार

शब्द और व्याकरण बोध

1. श, ष, स और ह के समूह को _____ व्यंजन कहा जाता है।
 (क) अंतःस्थ
 (ख) ऊप्य
 (ग) संयुक्त
 (घ) स्पर्श
2. निम्नलिखित में से कौन-सा शब्द अविकारी नहीं है?
 (क) क्रियाविशेषण
 (ख) विशेषण
 (ग) संबंधबोधक
 (घ) विस्मयादिबोधक
3. 'कठपुतली' _____ समास का उदाहरण है।
 (क) अव्ययीभाव
 (ख) कर्मधारय
 (ग) तत्पुरुष
 (घ) द्विवचन
4. निम्नलिखित में से उद्धरण चिह्न कौन-सा है?
 (क) (:-)
 (ख) (-)
 (ग) (?)
 (घ) ("—")
5. नीचे दिए गए शब्दों में से कौन-सा शब्द सदैव एकवचन में प्रयोग किया जाता है?
 (क) सोना
 (ख) हस्ताक्षर
 (ग) प्राण
 (घ) दर्शन
6. 'जो मीठा बोलता हो'
 (दिए गए वाक्यांश के लिए उचित एक शब्द का चयन कीजिए।)
 (क) मृदुभाषी
 (ख) वातुनी
 (ग) मितभाषी
 (घ) बहुभाषी

रचनात्मक बोध

निम्नलिखित गद्यांश को पढ़कर प्रश्न संख्या 7 और 8 के उत्तर दीजिए—
भारत एक विशाल देश है जो विभिन्न धर्मों, भाषाओं और संस्कृतियों का घर है। यह अपनी विविधता के लिए जाना जाता है। इसका इतिहास बहुत विस्तृत है और इसमें कई महत्वपूर्ण घटनाएँ हुई हैं। इसके इतिहास में कुछ ऐसी घटनाएँ हुई हैं, जो दुनिया भर में अपनी महत्ता के लिए जानी जाती हैं। लेकिन भारत की आजादी का महत्व सर्वाधिक है। आजादी के बल पर ही देश विकास के पथ पर आगे बढ़ रहा है।

7. भारत किस विशेषता के लिए जाना जाता है?
(क) विविधता के लिए (ख) एकता के लिए
(ग) धर्म के लिए (घ) संस्कृति के लिए
8. भारत किस पथ पर बढ़ रहा है?
(क) आजादी के (ख) विकास के
(ग) इतिहास के (घ) युद्ध के

मेधावी खंड

9. निम्नलिखित तथ्यों को ध्यानपूर्वक पढ़कर उचित विकल्प का चयन कीजिए—

- (अ) पल लिखना भाषा का मौखिक रूप है।
(ब) भाषण देना भाषा का मौखिक रूप है।
(स) पुस्तक लिखना भाषा का लिखित रूप है।
(क) (अ) और (ब) दोनों सही हैं।
(ख) (ब) और (स) दोनों सही हैं।
(ग) (अ) और (स) दोनों सही हैं।
(घ) उपरोक्त सभी सही हैं।

10. रान्यों तथा उनसे संबंधित भाषाओं के मिलान के उचित विकल्प का चयन कीजिए—

रान्य	भाषा
(अ) गोवा	(i) तमिल
(ब) महाराष्ट्र	(ii) कोंकणी
(स) तमिलनाडु	(iii) मलयालम
(द) केरल	(iv) मराठी
(क) अ-(iv), ब-(i), स-(ii), द-(iii)	
(ख) अ-(ii), ब-(iv), स-(i), द-(iii)	
(ग) अ-(ii), ब-(iv), स-(iii), द-(i)	
(घ) अ-(iv), ब-(ii), स-(i), द-(iii)	



For More Reference Study Material

Visit www.mtg.in

- ▶ Olympiad Workbooks
- ▶ Olympiad Prep-Guides
- ▶ Olympiad Previous Years' Papers
- ▶ Model Test Papers
- ▶ Online Test Package
- ▶ Live Lectures



SCAN & EXPLORE

MTG Learning Media Pvt. Ltd. The official academic partner of

202

ANSWERS

IGKO - 1. (B) 2. (A) 3. (D) 4. (D) 5. (B) 6. (D) 7. (B) 8. (C) 9. (B) 10. (B)
IEO - 1. (B) 2. (B) 3. (C) 4. (A) 5. (A) 6. (C) 7. (A) 8. (C) 9. (C) 10. (D)
NSO - 1. (D) 2. (D) 3. (D) 4. (C) 5. (A) 6. (D) 7. (B) 8. (C) 9. (B) 10. (C)
IMO - 1. (C) 2. (B) 3. (C) 4. (B) 5. (A) 6. (A) 7. (B) 8. (D) 9. (C) 10. (C)
ICSO - 1. (C) 2. (C) 3. (B) 4. (D) 5. (D) 6. (D) 7. (D) 8. (D) 9. (A) 10. (B)
ISSO - 1. (C) 2. (B) 3. (C) 4. (D) 5. (D) 6. (C) 7. (A) 8. (A) 9. (B) 10. (C)
INO - 1. (ख) 2. (ख) 3. (ग) 4. (घ) 5. (क) 6. (क) 7. (क) 8. (ख) 9. (ख) 10. (ख)

