



**Delhi Public School, Gandhinagar**  
**Academic Session 2024-25**  
**National Science Olmpaid**  
**CLASS-1**

**Student Name:**

**Total Questions : 30**

**Guidelines for the Candidate**

**Time : 1 hr**

- |    |  |
|----|--|
| 1. | Additional 10 minutes will be given to the students to fill up the students' information before the start of the exam. |
| 2. | All questions are compulsory. There is no negative marking. Use of calculator is not permitted.                        |
| 3. | Write your Roll no, Name and Class clearly on the answer sheet and do not forget to sign.                              |
| 4. | There is only one correct answer hence mark one choice only.   |
| 5. | Darken your choice with HB pencil or Blue/Black ball point pen.  |
| 6. | Rough work should be done in the blank space provided in the booklet.  |
| 7. | Return the answer sheet to the invigilator at the end of the exam. The question paper can be retained by the student.  |

1. We eat the seeds of \_\_\_\_\_



2. Manav saw a plant in his garden which had beautiful flowers. When he tried to pluck a flower, his finger was pricked. The plant could be \_\_\_\_\_

A. Dahila

B. Jasmine

C. Rose

D. Marigold

3. In which of the following activities bones and muscles are being used the least ?



A.

B.

C.

D.

4. Aavya ran into the kitchen from drawing room to switch off gas stove because rice kept on it was burning . Unscramble the given letter groups to select the sense organ that she has used here.


A. ARES

B. YSEE

C. ESON

D. KSIN

5. The items shown in the box are \_\_\_\_\_



A. Energy giving food

B. Body building food

C. Protective food

D. All of these



6. We get \_\_\_\_\_ fibre from the animal shown here .

A. Woollen

B. Cotton

C. Silk

D. Nylon

7. You must trim your nails because \_\_\_\_\_ get in long nails and reach our \_\_\_\_\_ while eating . It can make us sick.

A. food , heart

B. germs , stomach

C. colour , brain

D. food , lungs

8. If Shivani's class test is on 4<sup>th</sup> Thursday of August 20XX, then on which date is

AUGUST 20XX						
SUN	MON	TUES	WED	THUR	FRI	SAT
	1	2	3	4	5	6
7	8	9	10	11	12	13
14	15	16	17	18	19	20

her test ?

21	22	23	24	25	26	27
28	29	30	31			

- A. 29<sup>th</sup> August
- B. 21<sup>st</sup> August
- C. 25<sup>th</sup> August
- D. 18<sup>th</sup> August

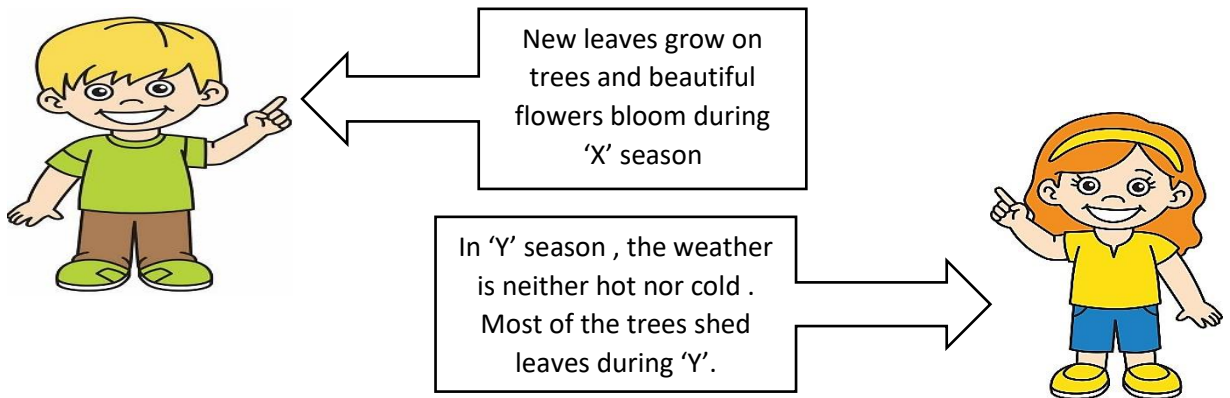
9. Ravi falls ill very frequently. He should take more of \_\_\_\_\_ in his diet.

- A. samosa
- B. vegetables
- C. Pizza
- D. Chips

10. Select the option containing items that should be kept in the same room of a house.

- A. Bucket , Soap , Towel , Knife
- B. Cooker , Plate , Book , Bowl
- C. Sofa , Chair , Table , Flower vase
- D. Bed , Fan , Shampoo , Pillow

11.



Read the above statement made by the two children and identify 'X' and 'Y' seasons.

- A. X- Autumn , Y- Spring
- B. X- Spring ,Y- Autumn
- C. X- Autumn , Y- Monsoon
- D. X- Winter , Y- Summer

12. Select the safety rule that we should always follow on road.

- A. We should take a rubber tube with us.

- B. We should not play with plug points.
- C. We should not push anyone on stairs.
- D. We should always follow the traffic signals.

13. Select the young one that will grow into the animal shown in picture.







- A. Calf
- B. Lamp
- C. Joey
- D. Tadpole

14. Select the odd one out based on number of seeds present in it.

- A. 
- B. 
- C. 
- D. 

15. The words given in the box are associated with which of the following sense organs ?

SOUR , SWEET , SALTY , BITTER

- A. 
- B. 
- C. 
- D. 

Q16. Fill in the blanks with the help of the given clues.



a) The device shown in the picture is used by a \_\_\_\_\_.

- A. Soldier
- B. Tailor
- C. Plumber
- D. Doctor

b) Name the vegetable shown in the given picture \_\_\_\_\_

- A. Carrot
- B. Cauliflower
- C. Brinjal
- D. Potato

c) Which of these animal lives in water \_\_\_\_\_

- A. Dolphin
- B. Ladybird
- C. Ostrich
- D. Monkey

d) This animal gives us wool from which we make warm clothes for the winter. Name the animal \_\_\_\_\_

A. Sheep

B. Horse

C. Bull

D. Cow

Q17. Tick  the correct answer.

a) Which of the body parts help us to walk.

A.



B.



C.



D.



b) Which of the following object can be used to show that air fills space.

A.



B.



C.



D. None of these

Q18. Based on the types of plant, select the odd one out among the following.

A. Neem

B. Mango

C. Mint

D. Banyan

Q19. Select the correct option that arranges these natural water bodies in an increasing order of size.

Ocean

Pond

Lake

Puddle

1

2

3

4

A. 2,1,3,4

B. 4,2,3,1

C. 1,2,3,4

D. 3,2,4,1

Q20. On boiling water changes to\_\_\_\_\_

A. Water droplets

B. Ice

C. Fog

D. Steam

Q21. In hill areas houses are made with sloping roofs because it prevents\_\_\_\_\_

A. Mountain animals from getting into house.

B. Flood water to enter into house.

- C. The house from breaking down from storms.
- D. Snow from collecting on the roof.

Q22. First Aid is the \_\_\_\_\_



- A. Activity done on the first day of the school.
- B. Immediate help given to an injured person before the doctor is available.
- C. First tooth broken of a child.
- D. Students who lead Sport's team.

Q23. The excess of X in our diet can make us fat. X is \_\_\_\_\_

- A. Burger
- B. Chips
- C. Fruits
- D. Both a and b

Q24. Select the correct statement out of the following.

- A. We go to a school to play with our friends.
- B. We go to an auto stand to board in an aeroplane.
- C. We go to a market when we are sick and hurt.
- D. We keep our money and jewellery in a bank.

Q25. All \_\_\_\_\_ thing can \_\_\_\_\_.

- A. Natural, breathe
- B. Man-made, grow
- C. Living, walk
- D. Non- living, do not breathe

Q26. Which of the following festival is hidden in this grid.

- A. People offer prayers in the Church on this day.
- B. A grand parade is held at kartavya Path in Delhi to celebrate it.
- C. Festivals of lights.
- D. None of these.

Z	I	E	V	F	D	S
A	N	R	T	Y	H	J
W	D	I	W	A	L	I

G	E	G	O	W	N	R
E	P	U	B	L	I	C
F	N	I	C	V	B	N