



SOF INTERNATIONAL GENERAL
KNOWLEDGE OLYMPIAD

Total Questions : 50

Time : 1 hr

PATTERN & MARKING SCHEME

Section	(1) General Awareness	(2) Current Affairs	(3) Life Skills	(4) Achievers Section
No. of Questions	30	10	5	5
Marks per Ques.	1	1	1	3



Scan the QR code
for more details

SYLLABUS

Plants and Animals, India and the World, Science and Technology, Earth and Its Environment, Universe, Language and Literature, Entertainment, Social Studies, Sports, Quantitative Aptitude and Reasoning, Current Affairs, Life Skills (Empathy, Effective Communication, Critical Thinking, Creative Thinking, Coping with Stress, Decision-Making, Problem Solving, Interpersonal Skills, Managing Emotions, Self-awareness).

Achievers Section : Higher Order Thinking Questions from the above given Syllabus.

- Angel Falls is the world's tallest waterfall. It is situated in which of the following countries?
(A) India (B) Venezuela
(C) Russia (D) Africa
- An important contribution of Swami Vivekananda was _____.
(A) Opening the Banaras Hindu University
(B) Abolition of Sati system
(C) Opening of Shantiniketan
(D) Starting the Ramakrishna Mission
- Who among the following was the longest serving Prime Minister of our country?
(A) Inder Kumar Gujral
(B) Jawaharlal Nehru
(C) Rajiv Gandhi
(D) Morarji Desai
- How many schedules are there in the Indian Constitution?
(A) 10 (B) 13
(C) 11 (D) 12
- What is the full form of GPS?
(A) Gateway Position System
(B) Global Positioning System
(C) General Power Status
(D) None of these
- _____ is the largest member of the monkey family.
(A) Baboon
(B) Pygmy marmoset
(C) Mandrill
(D) None of these
- What is the full form of LAN?
(A) Local Area Network
(B) Large Area Network
(C) Lateral Air Network
(D) Loose Air Network
- A farmer who regularly won prizes for best crop output explained the reason for his success as "I share my best seeds with my neighbour farmers". Why did he do this?
(A) He did not want his neighbours to be jealous.
(B) He really liked his neighbours.
(C) This ensured better pollination for his crops.
(D) He is a generous person. He likes to share.

ACHIEVERS SECTION

- Select the incorrect match.

Play	Characters
(A) Othello	- Desdemona, Lago, Cassio
(B) As You Like it	- Rosalind, Frederick, Celia
(C) King Lear	- Prospero, Miranda, Caliban
(D) Macbeth	- Duncan, Macduff, Banquo
- A sum of ₹ 1550 is lent out into two parts, one at 8% and another one at 6%. If the total annual interest is ₹ 108, then the money lent at 6% is _____.
(A) ₹ 650
(B) ₹ 900
(C) ₹ 800
(D) ₹ 750

PATTERN & MARKING SCHEME				
Section	(1) Word and Structure Knowledge	(2) Reading	(3) Spoken and Written Expression	(4) Achievers Section
No. of Questions	30	10	5	5
Marks per Ques.	1	1	1	3



Scan the QR code for more details

SYLLABUS

Section - 1 : Spellings, Collocations and Words related to Travel, Locations, Activities, Homonyms and Homophones, etc., Synonyms, Antonyms, Analogies and Spellings, One word, Phrasal verbs and Idioms, Modal, Word order, Nouns, Pronouns, Verbs, Adverbs, Adjectives, Articles, Prepositions, Conjunctions, Punctuation, Tenses, Voices and Narration, etc.

Section - 2 : Search for and retrieve information from various text types like News stories, Brochures, Formal and informal letters and advertisements. Understand information given in News reports, Brochures, Itinerary, etc., Acquire broad understanding of and look for specific information in short narratives, Biographies, Notices and Messages, etc.

Section - 3 : Ability to understand situation-based variations in functions like requesting and refusing, Apologies and stating of preferences and expression of intent, etc.

Section - 4 : Higher Order Thinking Questions - Syllabus as per Sections 1, 2 and 3.

WORD AND STRUCTURE KNOWLEDGE

Direction (Q. No. 1 and 2) : Choose the suitable word for each blank.

- Someone who interprets is an _____.
(A) interpretist (B) interpreter
(C) interprecian (D) interpretor
- Many diamond mines are _____ in South Africa.
(A) situation (B) situate
(C) situated (D) situating
- Choose the correct option.
Ravi: Did you invite her to the party?

Rahul: Well! Being invited is one thing. _____ inviting oneself is another.
(A) Whoever (B) Whereas
(C) Compared (D) Besides

- In which sentence is the word 'to' correctly used?
(A) This watermelon is to heavy.
(B) Hold it with to hands.
(C) It's very slippery to.
(D) Well, hand it to me.

READING

Direction (Q. No. 5 and 6) : Read the passage and answer the following questions.

"There is always someone worse off than you."

Once upon a time, the rabbits of Jim Corbett were so terrorised by the other animals, they did not know where to go. As soon as they saw a single animal approach them, off they used to run. One day, they saw a troop of wild horses stampeding about and in quite a panic all the rabbits scuttled off to a lake close by, determined to drown themselves rather than live in a continual state of fear. But just as they got near the bank of the lake, a troop of frogs frightened in their turn by the approach of the rabbits, scuttled off and jumped into the water. "Truly,"

said one of the rabbits, "things are not so bad as they seem." There is always someone worse off than you.

- Rabbits wanted to drown themselves because they _____.
(A) were scared of the horses
(B) did not like living in fear
(C) were chasing the frogs
(D) had nowhere to go
- Rabbits ran away from other animals because they _____.
(A) wanted to drown themselves
(B) were shy
(C) were scared of being stepped on
(D) were arrogant

SPOKEN AND WRITTEN EXPRESSION

Direction (Q. No. 7 and 8) : Choose one sentence to complete each dialogue.

- Sentence 1 : God wanted the people He had created to have a happy life.
Sentence 2 : _____
Sentence 3 : Water, air and sunlight were, therefore, given in abundance.

(A) That's why He decided to bless the Earth with riches
(B) People had to live with water, air, and Sun
(C) Earth could have them in abundance
(D) Therefore, He created the Earth

- Sentence 1 : From ancient times Indians have worshipped plants and trees.

Sentence 2 : _____

Sentence 3 : While modern man often works to 'conquer' nature, ancient Indians worshipped her.

(A) They regarded all flora and fauna as sacred

(B) These plants give us food and oxygen

(C) They lend beauty to our surroundings

(D) These plants sacrifice themselves to serve us

ACHIEVERS SECTION

9. Choose the best word/phrase to complete the sentence.

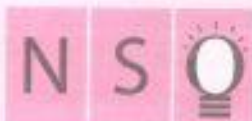
The new engineer has _____ qualifications but only a few months' experience.

- (A) a plentiful (B) plenty
(C) plenty of (D) a lot than

10. Choose the appropriate phrase.

The teacher approved her project after she had _____ it.

- (A) fine turned (B) fine-tuned
(C) tinkered with (D) refining



**NSO NATIONAL
SCIENCE OLYMPIAD**

Total Questions : 50

Time : 1 hr.

PATTERN & MARKING SCHEME			
Section	(1) Logical Reasoning	(2) Science	(3) Achievers Section
No. of Questions	10	35	5
Marks per Ques.	1	1	3



Scan the QR code for more details

SYLLABUS

Section - 1 : Verbal and Non-Verbal Reasoning.

Section - 2 : Heat, Motion and Time, Electric Current and its Effects, Light, Acids, Bases and Salts, Physical and Chemical Changes, Nutrition in Plants and Animals, Respiration in Organisms, Transportation in Plants and Animals, Reproduction in Plants, Natural Resources and Their Conservation (Forests: Our Lifeline, Wastewater Story).

Section - 3 : Higher Order Thinking Questions - Syllabus as per Section - 2.

LOGICAL REASONING

1. Tarun faces towards North. Turning to his right, he walks 25 metres. He then turns to his left and walks 30 metres. Next, he moves 25 metres to his right. Finally, he turns to the right and moves 40 metres. In which direction is he now from his starting point?

- (A) South-West (B) South
(C) North-West (D) South-East

2. Which of the following is exactly in the middle of the 17th element from the right end and 18th element from the left end in the given arrangement?

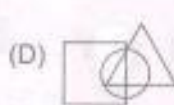
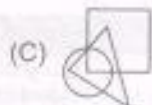
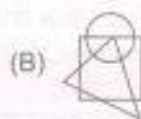
3D6\$C4E8#N5F1AP*9M@K2B%7HU

- (A) A (B) 1
(C) F (D) %

3. Select a figure from the options which does not satisfies the same conditions of placement of the dots as in Fig. (X).



Fig. (X)



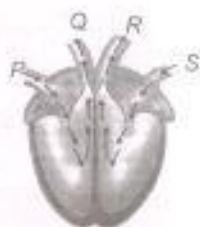
SCIENCE

4. X is present in the stomach. However, presence of excess of it causes indigestion, which requires the intake of milk of magnesia to undo the effect of X. What is X?

- (A) HCl (B) H_2SO_4

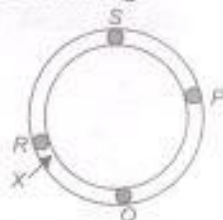
- (C) NaOH (D) KOH

5. The given diagram shows blood circulation pathway in the heart. Which of the following correctly shows the relative amount of oxygen and carbon dioxide at P, Q, R and S?



- | | |
|----------------------------|---------------------------|
| More CO₂ | More O₂ |
| (A) R | P, Q, S |
| (B) Q and R | P and S |
| (C) S | R |
| (D) P and Q | R and S |

6. Some blobs of wax are placed on a silver ring as shown in the diagram. If the ring is heated at X, then choose the correct option regarding the melting of wax because of heating.



- (A) Only blob R melts.

- (B) Blobs R, S and Q melt together.
 (C) Melting of blobs occurs in the order R, Q, S and P.
 (D) P, Q, R and S blobs melt together.

7. Which one of the following is true for all chemical reactions?

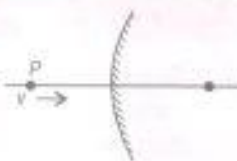
- (A) There is a change in volume.
 (B) Heat is evolved.
 (C) Chemical bonds are broken or formed.
 (D) There is a change in mass.

8. When a person breathes in, what happens to the diaphragm and to the rib cage?

- | | |
|-------------------------|-----------------------------|
| Diaphragm | Rib cage |
| (A) Becomes flatten | Moves downwards and inwards |
| (B) Becomes flatten | Moves outwards and upwards |
| (C) Becomes more curved | Moves downwards and inwards |
| (D) Becomes more curved | Moves outwards and upwards |

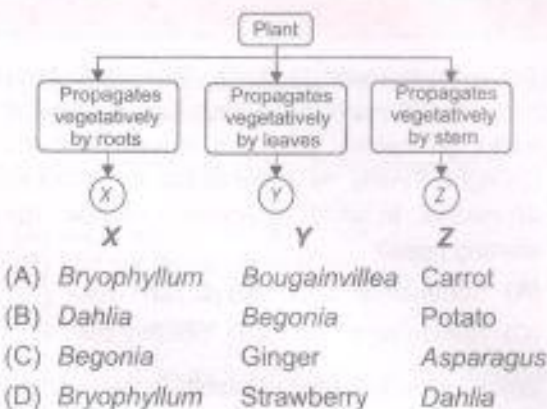
ACHIEVERS SECTION

9. A point object P moves towards a convex mirror with a constant speed v , along its optic axis. The speed of the image



- (A) Is always less than v
 (B) Is always more than v
 (C) Is equal to v
 (D) Decreases as P comes closer to the mirror.

10. Study the given flow chart and select the option that correctly identifies X, Y and Z.



Total Questions : 50

Time : 1 hr

Section	PATTERN & MARKING SCHEME			
	(1) Logical Reasoning	(2) Mathematical Reasoning	(3) Everyday Mathematics	(4) Achievers Section
No. of Questions	15	20	10	5
Marks per Ques.	1	1	1	3



Scan the QR code for more details

SYLLABUS

Section - 1 : Verbal and Non-Verbal Reasoning.


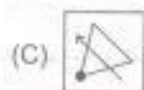
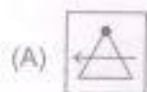
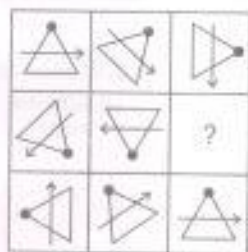
Section - 2 : Integers, Fractions and Decimals, Exponents and Powers, Algebraic Expressions, Simple Equations, Lines and Angles; Comparing Quantities, The Triangle and its Properties, Symmetry, Rational Numbers, Perimeter and Area, Data Handling, Visualising Solid Shapes.

Section - 3 : Syllabus as per Section - 2.

Section - 4 : Higher Order Thinking Questions - Syllabus as per Section - 2.

LOGICAL REASONING

1. Find the missing figure in the given figure matrix.



2. If '+' means '×', '-' means '÷', '÷' means '+' and '×' means '-', then $320 \div 225 + 15 \times 15 - 85 = ?$
 (A) 180 (B) 140
 (C) 60 (D) -940
3. In a certain code language, CHEMISTRY is written as NFIDITUSZ. How will BEANSTOCK be written in that language?
 (A) CFBOSLDPU (B) CFBOSUPDL
 (C) OBFCSUPDL (D) OBFCSLDPU

MATHEMATICAL REASONING

4. Solve for x : $\frac{1}{5}(x-8) + \frac{4+x}{4} + \frac{x-1}{7} = 7 - \frac{23-x}{5}$

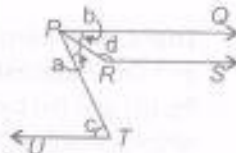
- (A) 7 (B) 8
 (C) 5 (D) 9

5. If 55% of $1000 + 60\%$ of $2000 = k : 2k + 2$, then find the sum of digits of k .

- (A) 4 (B) 2
 (C) 5 (D) 3

6. In the given figure, PQ , RS and UT are parallel lines. If $c = 75^\circ$ and $a = (2/5)c$, then find the value of $b + d/2$.

- (A) 92°
 (B) 115°
 (C) 112.5°
 (D) 135.5°



EVERYDAY MATHEMATICS

7. Garima and Mohit deposited ₹ 3000 and ₹ 4000 in a company at the rate of 10% per annum for 3 years and $2\frac{1}{2}$ years respectively. The difference of the amounts received by them will be

- (A) ₹ 100 (B) ₹ 1000
 (C) ₹ 900 (D) ₹ 1100

8. At Shimla, the temperature was -7°C on Tuesday. It then dipped by 3°C on Wednesday. On Thursday, it rose by 6°C . What was the temperature of Shimla on Wednesday and Thursday respectively?

- (A) -4°C , -10°C (B) -10°C , -4°C
 (C) -12°C , 8°C (D) -10°C , 4°C

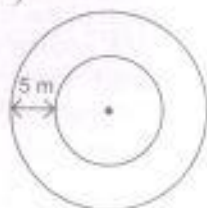
ACHIEVERS SECTION

9. The ratio of the outer and the inner circumference of a circular path as shown in the figure is 26 : 25.

If the path is 5 m wide, then find :

- (i) the area enclosed by the path
 (ii) the diameter of the inner circle

(Take $\pi = \frac{22}{7}$)



- | (i) | (ii) |
|---------------------------|-------|
| (A) 4007.14 m^2 | 250 m |
| (B) 4096.23 m^2 | 256 m |
| (C) 3345.17 m^2 | 125 m |
| (D) 3372.62 m^2 | 130 m |

10. Read the given statements carefully and select the correct option.

Statement I : If four quantities a , b , c and d are such that the ratio $a : b$ is equal to the ratio $c : d$, then we say $ac = bd$ and $a : d = b : c$.

Statement II : If $a : b = 5 : 9$ and $b : c = 4 : 7$, then


$a : b : c = 20 : 36 : 63$.

(A) Both Statement I and Statement II are true.

(B) Statement I is true but Statement II is false.

(C) Statement I is false but Statement II is true.

(D) Both Statement I and Statement II are false.



SOF INTERNATIONAL
COMPUTER SCIENCE OLYMPIAD

Total Questions : 50

Time : 1 hr

PATTERN & MARKING SCHEME				
Section	(1) Logical Reasoning	(2) Computer Science	(3) Information Technology	(4) Achievers Section
No. of Questions	10	30	5	5
Marks per Ques.	1	1	1	3



Scan the QR code for more details

SYLLABUS

Section - 1 : Verbal and Non-Verbal Reasoning.

Section - 2 : Fundamentals of Computer; Evolution of Computers; Memory & Storage Devices; Algorithms & Flowcharts (Introduction and Basic Symbols); Using Windows 10, MS-Word(Links, Mail Merge, Macros, Exploring Styles group), MS-PowerPoint (Working with Slides Master and Themes, Advancing slides using Hyperlink and Actions, Customizing Slide Shows), MS-Excel (Components of MS-Excel window, Editing and formatting cells in a worksheet, Introduction to Formulas, Sorting and filtering data, Macros, Features of Insert and Page layout tabs), Programming in QBasic, Networking and Cyber Safety.

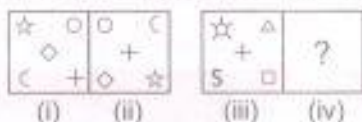
Section - 3 : AI, Robotics, IT gadgets, Devices, Apps, Computerization, and other Developments in the Field of IT.

Section - 4 : Higher Order Thinking Questions - Syllabus as per Sections 2 and 3.

Questions are based on Windows 10 and MS-Office 2016.

LOGICAL REASONING

1. There is a certain relationship between fig. (i) and (ii). Establish the same relationship between fig. (iii) and (iv) by selecting a suitable figure from the options which will replace the (?) in fig. (iv).



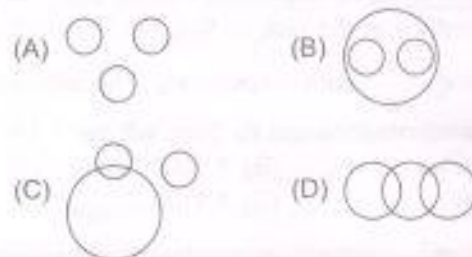
- (A) (B) (C) (D)

2. Mohit starting from a fixed point goes 15 m towards North and then after turning to his right he goes

15 m. Then he goes 10 metres, 15 metres and 15 metres respectively after turning to his right each time. How far is he from his starting point?

- (A) 20 metres (B) 5 metres
(C) 10 metres (D) 15 metres

3. Which of the following Venn Diagrams best represents the relationship amongst, "Mobile phones, Televisions and Electronic items"?



COMPUTER SCIENCE

4. Which of the following parts of File Explorer allows you to find documents, images, programs, etc. in Windows 10?

- (A) Status box
(B) Preview box
(C) Search box
(D) Details box

5. _____ feature of MS-PowerPoint 2016 allows you to show only the selected slides from the entire presentation.

- (A) Themes

- (B) Hyperlink
(C) Action
(D) Custom Slide Show

6. A browser is an interactive program that permits a user to view web pages on the computer. The browser performs which of the following services?

- (A) Connecting to the source computer whose address is specified
(B) Requesting new page from the server
(C) Receiving new page
(D) All of these

7. Select the odd one out.



8. Which of the following generation of computers is related to artificial intelligence?

- (A) Third generation
 (B) First generation
 (C) Fifth generation
 (D) Fourth generation

ACHIEVERS SECTION

9. Match the following icons given in Column-I with their descriptions given in Column-II with respect to MS-Excel 2016.

Column-I

Column-II



(i) Change page orientation



(ii) Set the margin sizes




(iii) Add a break

- (A) (a)-(ii), (b)-(i), (c)-(iii)
 (B) (a)-(i), (b)-(ii), (c)-(iii)
 (C) (a)-(iii), (b)-(ii), (c)-(i)
 (D) (a)-(i), (b)-(iii), (c)-(ii)

10. What would be the output of the following program in QBASIC?

X\$ = MID\$("International Computer Science Olympiad", 15, 8) PRINT X\$

- (A) Computer
 (B) International
 (C) Internat
 (D) Olympiad



SOF INTERNATIONAL
 SOCIAL STUDIES OLYMPIAD

Total Questions : 50

Time : 1 hr.

PATTERN & MARKING SCHEME

Section	(1) History	(2) Geography	(3) Social and Political Life	(4) Achievers Section
No. of Questions	20	15	10	5
Marks per Ques.	1	1	1	3



Scan the QR code for more details.

SYLLABUS

Section - 1 : History – Sources of Medieval Indian History, New Kings and Kingdoms, The Delhi Sultanate and the Mughal Empire, Mobile and Settled Communities, Bhakti Movement, Sufism and Regional Cultures, New Political Formations in the Eighteenth Century

Section - 2 : Geography – Earth and Our Environment, Air and Water, Human-Environment Interactions (Life in the Tropical and the Sub-tropical Regions, Deserts)

Section - 3 : Social and Political Life – Democracy and Equality, State Government, Unpacking Gender, Understanding Media, Markets Around Us

Section - 4 : Higher Order Thinking Questions-Syllabus as per Section - 1, 2 & 3.

1. Who among the following ruled between 1236 to 1240 in Delhi?

- (A) Ala-ud-din Khalji
 (B) Humayun
 (C) Raziyya Sultan
 (D) Babur

2. Select the incorrect match.

- (A) Gopala – Established Pala Kingdom
 (B) Bhoja – Founder of Chola dynasty
 (C) Prithviraj Chauhan – Famous Rashtrakuta King
 (D) Both (B) and (C)

3. In the twelfth century, Anantavarman belongs to which dynasty?

- (A) Ganga
 (B) Chola
 (C) Chera
 (D) Pandya

4. The first Mughal emperor in India was _____.

- (A) Jahangir
 (B) Shah Jahan
 (C) Babur
 (D) Akbar

5. Which of the following human activities can be described to have a negative impact on the environment?
- (A) Deforestation
(B) Rainwater harvesting
(C) Planting trees
(D) All of these
6. Date palm, cactus and thorny bushes are mostly found in _____.
- (A) Grasslands (B) Deserts
(C) Evergreen forests (D) Tundra
7. In the ancient South India, Vijayalaya from Uraiyur, captured the delta from the Muttaraiyar in the middle of which century?

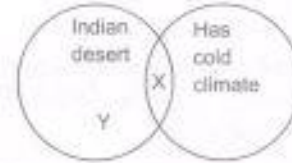
- (A) 12th century
(B) 11th century
(C) 19th century
(D) 13th century

8. Right to Education Act came into force from 1st April 2010. Under this act, every child in the age group of 6-14 years
- (A) Will be provided compulsory and free elementary education
(B) Will not be forced to go to school
(C) Will be provided with adequate food and clothes for his/her family
(D) Will be admitted to a foreign school based on his/her merit.

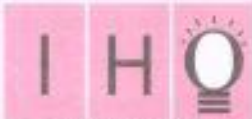
ACHIEVERS SECTION

9. Read the given statements and select correct ones.
- (i) The Members of Legislative Assembly represent people.
(ii) The Governor is appointed to ensure that the State Government works within the rules and regulations of the Constitution.
(iii) Governor of the State appoints the Chief Minister of that state.
(iv) Members of the Legislative Councils are elected by the people.
- (A) (i) and (ii) only
(B) (i), (ii) and (iii) only
(C) (iv) only
(D) (ii) and (iv) only

10. Refer to the given Venn diagram and select the option that correctly identifies X.



- | | |
|--------------|----------|
| X | Y |
| (A) Himalaya | Sahara |
| (B) Ladakh | Thar |
| (C) Sudan | Leh |
| (D) Ethiopia | Ladakh |



SOF INTERNATIONAL HINDI OLYMPIAD

कुल प्रश्न : 50

समय : 1 घंटा

श्रेणी	पेटर्न तथा अंक योजना		
	(1) शब्द और व्याकरण बोध	(2) रचनात्मक बोध	(3) वैशाली श्रेणी
प्रश्नों की संख्या	35	10	5
अंक प्रति प्रश्न	1	1	3



Scan the QR code for more details

पाठ्यक्रम

श्रेणी-1: भाषा-विचार, वर्ण-विचार, शब्द-विचार, बोध एवं समझ, शब्द-बंधन, उपसर्ग एवं प्रत्यय, संज्ञ, सर्वनाम एवं विशेषण, काल, क्रिया एवं कारक, लिंग एवं वचन, अधिकारी शब्द, अस्तुति संशोधन और विराम-चिह्न, मिलने, महीनों के नाम, धरातीक सञ्चलन एवं संस्कृति।

श्रेणी-2: अपठित गद्यांश, अपठित पद्यांश, मुहावरें एवं लोकोत्थितियाँ।

श्रेणी-3: उच्चतर क्रम बोध कौशल आधारित प्रश्न- श्रेणी 1 और 2 के पाठ्यक्रम के अनुसार।

शब्द और व्याकरण बोध

1. सविधान में हिंदी को राजभाषा का दर्जा _____ को दिया गया।
- (क) 14 सितंबर, 1950
(ख) 14 सितंबर, 1949
(ग) 15 अगस्त, 1947
(घ) 26 जनवरी, 1950
2. निम्नलिखित में से 'उज्ज्वल' शब्द किन वर्णों के संयोजन से बना है?
- (क) ऊ + ज् + ज् + व् + अ + ल् + अ
(ख) उ + ज् + ज् + व् + अ + ल् + आ
(ग) उ + ज् + ज् + व् + अ + ल् + अ
(घ) ऊ + ज् + ज् + व् + आ + ल् + आ

3. निम्नलिखित में से 'दिगंबर' का सही-विच्छेद कौन-सा है?

- (क) दिगं + बर
(ख) दिग + अंबर
(ग) दिक् + अंबर
(घ) दिगा + अंबर

4. निम्नलिखित में से _____ शब्द जातिवाचक संज्ञा शब्द नहीं है।

- (क) पुरुष
(ख) फल
(ग) मनुष्य
(घ) भारत

5. 'मेरी माँ स्वादिष्ट खाना बना रही हैं।' इस वाक्य में कौन-सा काल है?

- (क) वर्तमान काल
(ख) भूतकाल
(ग) भविष्यत काल
(घ) इनमें से कोई नहीं

6. निम्नलिखित में से कौन-सा क्रियाविशेषण का भेद नहीं है?

- (क) स्थानवाचक
(ख) भाववाचक
(ग) रीतिवाचक
(घ) परिमाणवाचक

रचनात्मक बोध

निम्नलिखित पद्यांश को पढ़कर प्रश्न संख्या 7 और 8 के उत्तर दीजिए—

चला गया जो समय लौटकर, कभी नहीं फिर आता,
सदा समय को खोने वाला, कर मल-मल फड़ताता।
जिसने इसे न माना, इसको जिसने भी तुकराया,
लाख यत्न करने पर भी, हाथ न उसके आया।
हो जाता है एक घड़ी के लिए जन्मभर रोना,
समय बहुत ही मूल्यवान है, व्यर्थ कभी मत खोना।
धन खो जाता, श्रम करने से फिर मनुष्य है पाता,
स्वास्थ्य बिगड़ जाने पर, उपचारों से है बन जाता।
विद्या खो जाती, फिर भी पढ़ने से है आ जाती,
लेकिन खो जाने से मिलती नहीं समय की शांति।

जीवन भर भटकों, छातों, दुनिया का कोना-कोना,
समय बहुत ही मूल्यवान है, व्यर्थ कभी मत खोना।

7. समय को खोने वाला क्या करता है?

- (क) हाथ मल-मलकर फड़ताता रह जाता है।
(ख) दुनिया में भटकता रहता है।
(ग) लाख यत्न करता है।
(घ) (क) और (ख) दोनों

8. दिए गए पद्यांश के अनुसार क्या खोने पर दोबारा प्राप्त हो जाता है?

- (क) मूल्य
(ख) समय
(ग) दुनिया
(घ) धन और विद्या

मेधावी खंड

9. समास के भेदों के आधार पर उचित विकल्प का चयन कीजिए—

- (अ) माता-पिता (i) कर्मधारय समास
(ब) त्रिनेत्र (ii) द्विगु समास
(स) नवरत्न (iii) बहुव्रीहि समास
(द) नीलगाय (iv) द्वंद्व समास
(य) देशभक्ति (v) अव्ययीभाव समास
(र) बंशक (vi) तत्पुरुष समास

- (क) अ-(iii), ब-(ii), स-(i), द-(vi), य-(iv), र-(v)
(ख) अ-(iv), ब-(ii), स-(iii), द-(v), य-(vi), र-(i)
(ग) अ-(ii), ब-(iii), स-(iv), द-(i), य-(v), र-(vi)
(घ) अ-(iv), ब-(iii), स-(ii), द-(i), य-(vi), र-(v)

10. नीचे दी गई तालिका का अध्ययन कर सही विकल्प का चयन कीजिए—

(अ) स्वर	(i)	इनके उच्चारण में हवा नाक और मुख दोनों से निकलती है।
(ब) व्यंजन	(ii)	इनका प्रयोग केवल संस्कृत के तत्सम शब्दों में होता है।
(स) विसर्ग	(iii)	इनके उच्चारण के लिए स्वरों की सहायता लेनी पड़ती है।
(द) अनुनासिक	(iv)	ये स्वतंत्र होते हैं।

- (क) अ-(iv), ब-(iii), स-(ii), द-(i)
(ख) अ-(i), ब-(iii), स-(ii), द-(iv)
(ग) अ-(ii), ब-(iii), स-(iv), द-(i)
(घ) अ-(iv), ब-(ii), स-(iii), द-(i)



For More Reference Study Material

Visit www.mtg.in

- ▶ Olympiad Workbooks
- ▶ Olympiad Prep-Guides
- ▶ Olympiad Previous Years' Papers
- ▶ Model Test Papers
- ▶ Online Test Package
- ▶ Live Lectures



SCAN & EXPLORE

mtg MTG Learning Media Pvt. Ltd. *The official academic partner of* **SOF**

ANSWERS

IGKO - 1. (B) 2. (D) 3. (B) 4. (D) 5. (B) 6. (C) 7. (A) 8. (C) 9. (C) 10. (B)
IEO - 1. (B) 2. (C) 3. (B) 4. (D) 5. (B) 6. (C) 7. (A) 8. (A) 9. (C) 10. (B)
NSO - 1. (D) 2. (A) 3. (B) 4. (A) 5. (D) 6. (C) 7. (C) 8. (B) 9. (A) 10. (B)
IMO - 1. (C) 2. (D) 3. (C) 4. (B) 5. (B) 6. (C) 7. (D) 8. (B) 9. (A) 10. (C)
ICSO - 1. (C) 2. (A) 3. (B) 4. (C) 5. (D) 6. (D) 7. (D) 8. (C) 9. (A) 10. (A)
ISSO - 1. (C) 2. (D) 3. (A) 4. (C) 5. (A) 6. (B) 7. (C) 8. (A) 9. (B) 10. (B)
IHO - 1. (ख) 2. (ग) 3. (ग) 4. (घ) 5. (क) 6. (ख) 7. (क) 8. (घ) 9. (घ) 10. (क)

Filling of all columns completely & accurately is compulsory

1. STUDENT NAME (IN ENGLISH CAPITAL LETTERS ONLY)

--	--	--	--	--	--	--	--	--	--	--	--	--	--	--	--	--	--	--	--

IMPORTANT: PLEASE FILL IN SCHOOL CODE, CLASS, SECTION & ROLL NO. CORRECTLY FOR COMPUTATION OF RESULT.

PERSONAL DETAILS

2. SCHOOL CODE										3. CLASS			
<input type="text"/>	<input type="text"/>	<input type="text"/>	<input type="text"/>	<input type="text"/>	<input type="text"/>	<input type="text"/>	<input type="text"/>	<input type="text"/>	<input type="text"/>	<input type="text"/>	<input type="text"/>	<input type="text"/>	<input type="text"/>
A	B	C	D	E	F	G	H	I	J	0	1	2	3
K	L	M	N	O	P	Q	R	S	T	4	5	6	7
U	V	W	X	Y	Z					8	9		

4. SECTION				5. ROLL NO.				6. QUESTION PAPER SET			
<input type="text"/>	<input type="text"/>	<input type="text"/>	<input type="text"/>	<input type="text"/>	<input type="text"/>	<input type="text"/>	<input type="text"/>	<input type="text"/>	<input type="text"/>	<input type="text"/>	<input type="text"/>
A	B	C	D	0	1	2	3	A	B	C	D
E	F	G	H	4	5	6	7				
I	J	K	L	8	9						

By sharing your mobile no. you authorize SOF to share with you by SMS and phone calls SOF related information.

7. MOBILE NUMBER
(Write your Mobile no. in the boxes and darken the circles)

<input type="text"/>	<input type="text"/>	<input type="text"/>	<input type="text"/>	<input type="text"/>	<input type="text"/>	<input type="text"/>	<input type="text"/>	<input type="text"/>	<input type="text"/>	<input type="text"/>	<input type="text"/>	<input type="text"/>	<input type="text"/>	<input type="text"/>	<input type="text"/>	<input type="text"/>	<input type="text"/>	<input type="text"/>	<input type="text"/>
0	1	2	3	4	5	6	7	8	9	0	1	2	3	4	5	6	7	8	9
A	B	C	D	E	F	G	H	I	J	A	B	C	D	E	F	G	H	I	J
K	L	M	N	O	P	Q	R	S	T	K	L	M	N	O	P	Q	R	S	T
U	V	W	X	Y	Z					U	V	W	X	Y	Z				

8. GENDER

MALE

OR

FEMALE



MARK YOUR ANSWERS

1	A	B	C	D	26	A	B	C	D
2	A	B	C	D	27	A	B	C	D
3	A	B	C	D	28	A	B	C	D
4	A	B	C	D	29	A	B	C	D
5	A	B	C	D	30	A	B	C	D
6	A	B	C	D	31	A	B	C	D
7	A	B	C	D	32	A	B	C	D
8	A	B	C	D	33	A	B	C	D
9	A	B	C	D	34	A	B	C	D
10	A	B	C	D	35	A	B	C	D

THIS COLUMN IS FOR CLASSES 5 & ABOVE

11	A	B	C	D	36	A	B	C	D
12	A	B	C	D	37	A	B	C	D
13	A	B	C	D	38	A	B	C	D
14	A	B	C	D	39	A	B	C	D
15	A	B	C	D	40	A	B	C	D
16	A	B	C	D	41	A	B	C	D
17	A	B	C	D	42	A	B	C	D
18	A	B	C	D	43	A	B	C	D
19	A	B	C	D	44	A	B	C	D
20	A	B	C	D	45	A	B	C	D
21	A	B	C	D	46	A	B	C	D
22	A	B	C	D	47	A	B	C	D
23	A	B	C	D	48	A	B	C	D
24	A	B	C	D	49	A	B	C	D
25	A	B	C	D	50	A	B	C	D

Signature of the Student & Date of Examination	Signature of the Invigilator & Date of Examination
--	--