



**Delhi Public School, Gandhinagar**  
**Half Yearly Sample Paper (2024-25)**

**Class: IV**

**Computer Science**

**Date: . .24**

**Time: hours**

**M. Marks:**

**Name: \_\_\_\_\_ Sec: \_\_\_\_\_ Roll No.: \_\_\_\_\_**

***General Instructions:-***

- (i) There are 3 Sections in this paper.*
- (ii) All the questions are compulsory.*
- (iii) Answer the questions as per the instructions.*

**Section- A**

**Q-I Tick the correct option from the following. (Multiple Choice Questions).**

1. Which of the following generation used vacuum tubes?  
a) First generation                      b) Second generation                      c) None of the above
2. Which of the following tab contains tools to indent a paragraph?  
a) Home    b) Design    c) View
3. Priya wants to highlight a picture outline, so which option will be used by her?  
a) Border    b) Format    c) ClipArt
4. Rahul wants to talk with his friend via video call. Which of the following device will be used by him?  
a) Web-Camera                                      b) Pen drive    c) CD-ROM
5. Which of the following is the largest memory unit in digital storage?  
a) KB    b) MB    c) TB
6. Siya wants to highlight a picture outline, so which option she should use in Word?  
a) Border    b) Format    c) ClipArt
7. Which of the following is not a pointing device?  
a) Mouse    b) Joystick    c) Scanner
8. Which is the largest memory unit for measurement of data in computer?  
a) KB    b) MB    c) TB
9. Riya has written essay in MS Word. Now she wants to save her document. Which of the following is used to save her document?  
a) Home tab, copy                                      b) Insert tab, picture                                      c) File tab, save
10. Rahul wants to talk with his friend via video call. Which device should he get attached to his computer system?  
a) Web camera    b) Pen drive    c) CD-ROM

**Section-B**

**Q- II Rewrite the following underlined word by replacing with correct word.**

1. **Fourth generation** is based AI technology.
2. **Justify** places the selected text in line with the right margin MS Word.
3. The **Print** option is used to save the document in MS Word.
4. Projector is **storage device**.
5. **Hard-disk** has limited capacity and data is lost when power is switched off.
6. A **ClipArt** is a collection of different types of borders in MS Word.
7. A **pen drive** is only used with a LCD monitor.

**Q-III Match the following.**

Sr.No.	Column A	Sr.No.	Column B
1.	0 and 1	a.	Microphone
2.	To record sound	b.	Binary digit

**Section-C**

**Q-IV Answer the following questions.**

1. What is MICR?
2. What are the components of the Analytical Engine?
3. Write a short note on RAM.

**Q-V Application based questions.**

1. Smarty has lost her notebook in the class and the next day she has to appear For a test. Which device will you suggest her to take the photocopy of the Chapters from her friend's notebook.
2. Fill in the blanks to complete the conversation of measuring units.
  - a) Kilobyte = \_\_\_\_\_ bytes
  - b) 1 Gigabytes = 1024 \_\_\_\_\_
  - c) 1 Terabyte = \_\_\_\_\_ Gigabytes.
3. Priya has been asked to create a poster on "Summer Camp Activities" by her teacher. She wants to apply decorative text and add pictures, shapes and Callouts to the poster. Help her how she can do this.
4. Amit has created a document with several paragraphs. He notices that the Paragraphs Appear with a ragged right edge. What can be do to make the right edge smooth similar to the left edge?

## L.2 Evolution of Computers CBE Based Questions (April)

### Chapter 2

### CBE WORKSHEET

## Evolution of Computers

#### A Fill in the blanks.

1. An abacus is also called a counting frame.
2. The Pascaline calculator was an automatic mechanical calculator.
3. Charles Babbage is known as the 'Father of Computers'.
4. Siri is Apple's voice-controlled personal assistant.

#### B Multiple Choice Questions.

1. Which of the following generations used vacuum tubes?  
(a) First generation  (b) Second generation   
(c) Third generation  (d) All of the above
2. Which of the following is an example of a second-generation of computer?  
(a) ENIAC  (b) EDVAC   
(c) UNIVAC  (d) None of the above
3. Which of the following is a category of Computers?  
(a) Mainframe  (b) Super Computer   
(c) Micro Computers  (d) All of the above
4. Which of the following is an example of fourth-generation computers?  
(a) Desktop  (b) Macintosh   
(c) Both (a) & (b)  (d) None



Write "True" or "False".

1. Abacus is the first calculator. True
2. Palmtop is an example of a microcomputer. True
3. A minicomputer cannot process multiple tasks at a same time. False
4. Supercomputers are the most powerful computers in terms of data processing and speed. True



**Computer CBE Based Questions**  
**Month: June'2024-25**  
**L.5 MORE FEATURES OF WORD-2016**

**CBE WORKSHEET**

**A] Fill in the blanks.**

1. The **Find** option is used to search for a particular word or phrase in a Document.
2. The **navigation** pane appears on the left side of the screen.
3. The **replace all** option is used to replace a word with another word in the entire document.
4. **Line spacing** is the blank space between the lines of a paragraph in a document.
5. **Margin** is the blank space at the sides of a page in a document.

**B] Multiple choice question.**

1. Which of the following tab contains tools to indent a paragraph?  
A] Home  
B] Design  
C] File  
D] None
2. Which of the following is the type of alignment?  
A] left  
B] center  
C] Justify  
D] All of the above
3. Which of the following is used to display the title of a document?  
A] Footer  
B] Title  
C] Header  
D] None
4. Which of the following contains the option to print the document?  
A] Print paper  
B] File  
C] Home  
D] None
5. **Look at the following picture and answer the following questions.**

**Keyboard:** It is used to input data and instructions into the computer. A standard keyboard has 104 keys which are divided into four groups typing keys. Function keys, Navigation keys, and Control keys. Sir Christopher Latham Sholes was the inventor of the QWERTY keyboard.

**Mouse:** It is hand-held pointing device. It is used to control the movement of the pointer to select an object, open files and folders and draw pictures, etc. Dr. Engelbart is the invent the or of the computer mouse.

i) Which type of intend is applied in the above picture?  
**Ans. Increase Intend.**

ii) What is used to replace the word four with three?  
**Ans. Find and Replace Option.**

iii) What type of alignment is applied to the above paragraphs? Name the short cut key.  
**Ans. Align Justify is applied. Shortcut key is Ctrl + J.**

iv) What type of alignment is default alignment applied in MS Word? Name the short cut key.  
**Ans. Align Left. Shortcut key is Ctrl + L.**

v) If Sona wants to increase the line spacing to 1.5 line spacing, what shortcut will she use?  
**Ans. Ctrl + 5.**

**AIL [ ART INTEGRATED LEARNING ]**

**Creating Invitation Card and Greeting Card. [ Practically to be done ]**



## Computer CBE Based Questions for the Month of July. L.4 Working with Images- MS Word

### CBE Questions

1. Siyanvi wants to add decorative text to her document to enhance the Appearance of the document. Which feature is given to write text in decorative Style in MS Word?  
a) **WordArt**                      b) Insert                      c) View
2. Keya has written essay in MS Word. Now she wants to save his document. Which tab and option is used to save her document?  
a) Home tab, copy                      b) Insert tab, Pictures                      c) **File tab, Save as**
3. In Ms Word, Rahul has prepared one resume for applying job. He wants to set his picture in oval shape. Which option he should use in MS Word?  
a) Picture effect                      b) **Picture styles**                      c) WordArt
4. Riya wants to highlight a picture outline, so which option she should use?  
a) **Border**                      b) Format                      c) ClipArt
5. Ravi has made one cake picture with the help of shape. Now he wants to write his name on the cake. Is it possible to add text in shape?  
a) **Yes, we can add.**                      b) No, we can not.

## Computer CBE Based Questions for The Month of August'24 L.1 INPUT AND OUTPUT DEVICES

### CBE WORKSHEET

1. A device that allows users to feed data into a computer for analysis and storage and to give commands to the computer is called  
a) Output device  
b) **Input device**  
c) Memory  
d) Both a and b

2. A device that communicates the results of data processed by the computer and converts the Digital information into a form that humans can easily read and understood is called
- a) Input
  - b) Monitor
  - c) **Output**
  - d) Keyboard
3. Rahul wants to talk with his friend via video call. Which device should he get attached to your computer system?
- a) **Web cam**
  - b) Pen drive
  - c) CD-ROM
  - d) Digital camera
4. Which type of printer is used by Riya to print architectural blue-prints and engineering designs?
- a) Scanner
  - b) Daisy wheel
  - c) **Plotters**
  - d) Projector
5. Siya is conducting the meeting in large room. She wants to display her PowerPoint presentation on a large screen so, which device she should use to present her presentation?
- a) Monitor
  - b) Printer
  - c) **Projector**
  - d) All of the above



# Computer CBE Based Questions for The Month of Aug-Sept'24.

## L.3 Computer Memory And Storage Device

### CBE Questions

1. Which type of memory is used to store a single character?  
A] DVD  
B] USB  
C] Megabyte  
D] Byte
2. Which of the following uses a blue laser is used to read the disc?  
A] Blu-ray  
B] DVD  
C] CD  
D] None
3. Which of the largest memory unit in digital storage?  
A] Kb  
B] Mb  
C] Tb  
D] Gb
4. Which of the following is used in digital cameras?  
A] Memory card  
B] Pen drive  
C] Both a and b  
D] None
5. Which of the following is type of secondary storage device?  
A] Hard disk  
B] CD  
C] DVD  
D] All of the above

# Delhi Public School, Gandhinagar

## Class- IV

### Computer Sample Notebook for The Month of August'24

#### L.1 INPUT AND OUTPUT DEVICES

Pg.No : 7

#### Jump Start

1. Answer the following questions.

a) Name the four types of devices that make a computer system.

Ans: Monitor, Mouse, Keyboard and CPU.

b) Name any two pointing devices.

Ans: Mouse and Joystick

c) What are the four different types of keys in a keyboard?

Ans: Alphabet keys, Number keys, Function Keys and Arrow Keys.

d) Which input device is used to record sound?

Ans: Microphone

Pg.No:- 15

#### SECTION-1

#### A] Fill in the blanks.

1. The **scanner** converts printed data or images from paper to digital data format.
2. A **plotter** is used to print architectural blueprints, engineering designs, and other detailed drawings.
3. **Barcode reader** is a handheld input device.
4. The **laser** printers give very high-quality output.
5. A **scanner** copies the text and pictures directly into the computer.
6. A **webcam** is used to share pictures and have live chat with our friends and relatives

#### B] Write [T] for true or [F] for False statements.

1. A digital camera is used to share pictures and have video telephony on the internet. True
2. A light pen is only used with an LCD monitor. False
3. A touchpad is mostly used on the laptop computer. True
4. Dot-matrix printer is fast but prints low-quality of images. True

5. Ink-jet printer is more expensive than a laser printer.

False

**C] Multiple choice questions.**

1. Which of the following is an example of an input device?

**A] Keyboard**

B] Monitor

C] Computer

D] Headphones

**Pg.No:- 16**

2. User communicates with a computer with the help of \_\_\_\_\_ devices.

A] Input

B] Output

C] Software

**D] Both a and b**

3. Which of the following is not a pointing device?

A] Mouse

B] Joystick

C] Light Pen

**D] Scanner**

4. Which of the following are not input devices?

A] Webcam and Microphone

**B] Bar code reader**

C] MICR

**D] Monitor and Printer**

5. The MICR stands for

A] Magnetic Ink Card Reader

B] Magnetic Ink Code Recognition

C] Meta Ink Character Recognition

**D] None of these**

**D. Answer the following questions.**

1. What is the use of Graphics Tablet?

Ans It is an input device that allows a user to hand-draw images, animation and graphics on a computer using a special pen-like device called a stylus.

2. What is MICR?

Ans: MICR (Magnetic Ink Character Recognition) is used to recognize characters that are written using a special Magnetic Ink. It is largely used in banks.

3. How is plotter different from a normal printer?

Plotter	Printer
1. Plotter can work on very large sheets of paper.	1. Printer is used to print the output on a paper (A4 size).
2. It is more expensive	2. Normal printers are less expensive

4. Explain the types of printer.

Ans Types of printer:

i) Dot matrix printers: - These printers print characters by striking on the paper. They cannot produce high-quality images.

ii) Inkjet printers: - These printers print the text and graphics by spraying droplets of ink on paper. It can produce high-quality images.

iii) Laser Printers: - These printers use laser beams to print the images. They are very fast and produce high-quality images.

**SECTION-II**

**Application Based Questions**

1. Identify and give the name of the device that you will use in the situation given below.

A] To display a presentation in the classroom → Projector

B] To create hand-drawn images: → Graphic Tablet

C] To recognize characters: → MICR

D] To scan images: → Scanner

2. Smarty has lost her notebook in the class and the next day she has to appear for a test. Which device will you suggest her to take the photocopy of the chapters from her friend's Notebook?

Ans: **By using printer or photocopy machine** she would be able to copy the chapters from her friends notebook.

## **CBE WORKSHEET**

1. A device that allows users to feed data into a computer for analysis and storage and to give commands to the computer is called
- a) Output device
  - b) Input device**
  - c) Memory
  - d) Both a and b
2. A device that communicates the results of data processed by the computer and converts the Digital information into a form that humans can easily read and understood is called
- a) Input
  - b) Monitor
  - c) Output**
  - d) Keyboard
3. Rahul wants to talk with his friend via video call. Which device should he get attached to your computer system?
- a) Web cam**
  - b) Pen drive
  - c) CD-ROM
  - d) Digital camera

4. Which type of printer is used by Riya to print architectural blue-prints and engineering designs?
- a) Scanner
  - b) Daisy wheel
  - c) **Plotters**
  - d) Projector
5. Siya is conducting the meeting in large room. She wants to display her PowerPoint presentation on a large screen so, which device she should use to present her presentation?
- a) Monitor
  - b) Printer
  - c) **Projector**
  - d) All of the above

# Delhi Public School, Gandhinagar

Class- IV






Computer Sample Notebook for The Month of Aug-Sept'24.

## L.3 Computer Memory And Storage Device

Pg.No:- 33

Jump Start

Match the storage device to its name.

1.		•	(a) Memory Card (4)
2.		•	(b) External Hard Disk (5)
3.		•	(c) Hard Disk (3)
4.		•	(d) Pen Drive (2)
5.		•	(e) CD/DVD (1)

Pg.No:-40

### Section-I

A] Fill in the blanks.

1. Data that is meaningful and useful is called information.
2. Secondary memory is also known as external memory.
3. Pen drive is also called a flash drive.
4. The smallest unit for measurement of data in a computer is called a bit.
5. The memory card is mainly used in digital cameras as a storage device.

Pg.No: 41

B] Multiple choice questions.

1. \_\_\_\_\_ has smallest storage capacity.

A] CD

B] DVD

C] Hard Disk

D] None

2. A DVD is an \_\_\_\_\_
- A] Optical Disc
  - B] Output device
  - C] Portable Device
  - D] Hard Disk
3. How much is one terabyte equal to?
- A] 1024 Megabytes
  - B] 1024 Bytes
  - C] 1024 Kilobytes
  - D] 1024 Gigabytes
4. RAM stand for \_\_\_\_\_
- A] Read Anywhere Memory
  - B] Random Access Memory
  - C] Read Access Memory
  - D] Random Anything Memory

Pg.No: 42

**C] Write (T) for true or (F) for false statements.**

- |  |              |
|--|--------------|
| 1. Bits and bytes are units of computer memory.  | <b>True</b>  |
| 2. A DVD looks like a CD, but can hold much more information.  | <b>True</b>  |
| 3. A hard disk is a portable storage device that is used to transfer files between computers easily. | <b>False</b> |
| 4. RAM has limited capacity and data is lost when power is switched off.                             | <b>True</b>  |
| 5. You can record on CD-R more than one time.  | <b>False</b> |

**D] Answer the following questions.**

1. How is data different from information?

Ans: Data refers to the raw facts or figures while information is the data that has been processed or analyzed in such a way that it becomes meaningful and useful.



2. Write a short note on RAM.

Ans: RAM or Random Access Memory is used to store data and program that computer is currently working on. If the computer is switched off, the data in RAM will be lost. Hence, it is referred to as volatile memory.

3. What are the two types of Compact Discs (CD)?

Ans: There are two types of CD available

CD-R:- The CD-R (Compact Disc-Recordable) is a compact disc that can record data only Once.

CD-RW:- The CD-RW (Compact Disc-Rewritable) is a compact disc used for reading as well as writing data.

4. Compare Compact Discs (CD) with Digital Versatile Disc (DVD)?

Sr.No	CD	Sr.No	DVD
1.	It can store up to 650-700MB of data.	1.	it can store seven times more data than a CD
2.	A CD Drive is required to read or write on CDs	2.	A DVD drive is required to read or write DVDs

5. Why is the pen drive a popular storage device?

Ans: Pen drive is also called flash drive. It is small, lightweight and portable device. It is used for copying and moving data from one computer to another.

**F] Match the following columns**

	<b>COLUMN A</b>		<b>COLUMN B</b>
1.	1 MB	a.	Primary memory
2.	ROM	b.	1024 KB
3.	Operating System	c.	Secondary memory
4.	Hard disk	d.	Loaded into the main memory

**1-b 2-a 3-d 4-c**

## Section-II

### Application Based Questions.

1. Fill in the blanks to complete the conversation of measuring units.

- a. Kilobyte= 1024 bytes.
- b. 1 Megabyte = 1024 Kilobytes (KB)
- c. 1 Gigabyte (GB) = 1024 Megabyte
- d. 1 Terabyte (TB) = 1024 Gigabyte (GB)
- e. 1 Petabyte = 1024 TB

2. Neha wants to store very high-quality movies on a storage device to watch them and share them with others in the future. Which storage device would you suggest her to use?

Ans: Blue-ray disc

### CBE Questions

1. Which type of memory is used to store a single character?

- A] DVD
- B] USB
- C] Megabyte
- D] Byte**

2. Which of the following uses a blue laser is used to read the disc?

- A] Blu-ray**
- B] DVD
- C] CD
- D] None

3. Which of the largest memory unit in digital storage?

- A] Kb
- B] Mb
- C] Tb**
- D] Gb

4. Which of the following is used in digital cameras?
- A] Memory card
  - B] Pen drive
  - C] Both a and b
  - D] None
5. Which of the following is type of secondary storage device?
- A] Hard disk
  - B] CD
  - C] DVD
  - D] All of the above



**Delhi Public School, Gandhinagar**  
**Half Yearly Sample Paper (2024-25)**

**Class: IV**

**Computer Science**

**Date: . .24**

**Time: hours**

**M. Marks:**

**Name: \_\_\_\_\_ Sec: \_\_\_\_\_ Roll No.: \_\_\_\_\_**

**General Instructions:-**

- (i) *There are 3 Sections in this paper.*
- (ii) *All the questions are compulsory.*
- (iii) *Answer the questions as per the instructions.*

**Section- A**

**Q-I Tick the correct option from the following. (Multiple Choice Questions).**

1. Which of the following generation used vacuum tubes?  
a) First generation                      b) Second generation                      c) None of the above
2. Which of the following tab contains tools to indent a paragraph?  
a) Home    b) Design    c) View
3. Priya wants to highlight a picture outline, so which option will be used by her?  
a) Border    b) Format    c) ClipArt
4. Rahul wants to talk with his friend via video call. Which of the following device will be used by him?  
a) Web-Camera    b) Pen drive    c) CD-ROM
5. Which of the following is the largest memory unit in digital storage?  
a) KB    b) MB    c) TB
6. Siya wants to highlight a picture outline, so which option she should use in Word?  
a) Border    b) Format    c) ClipArt
7. Which of the following is not a pointing device?  
a) Mouse    b) Joystick    c) Scanner
8. Which is the largest memory unit for measurement of data in computer?  
a) KB    b) MB    c) TB
9. Riya has written essay in MS Word. Now she wants to save her document. Which of the following is used to save her document?  
a) Home tab, copy    b) Insert tab, picture    c) File tab, save
10. Rahul wants to talk with his friend via video call. Which device should he get attached to his computer system?  
a) Web camera    b) Pen drive    c) CD-ROM

**Section-B**

**Q- II Rewrite the following underlined word by replacing with correct word.**

1. **Fourth generation** is based AI technology.
2. **Justify** places the selected text in line with the right margin MS Word.
3. The **Print** option is used to save the document in MS Word.
4. Projector is **storage device**.
5. **Hard-disk** has limited capacity and data is lost when power is switched off.
6. A **ClipArt** is a collection of different types of borders in MS Word.
7. A **pen drive** is only used with a LCD monitor.

**Q-III Match the following.**

Sr.No.	Column A	Sr.No.	Column B
1.	0 and 1	a.	Microphone
2.	To record sound	b.	Binary digit

**Section-C**

**Q-IV Answer the following questions.**

1. What is MICR?
2. What are the components of the Analytical Engine?
3. Write a short note on RAM.

**Q-V Application based questions.**

1. Smarty has lost her notebook in the class and the next day she has to appear For a test. Which device will you suggest her to take the photocopy of the Chapters from her friend's notebook.
2. Fill in the blanks to complete the conversation of measuring units.
  - a) Kilobyte = \_\_\_\_\_ bytes
  - b) 1 Gigabytes = 1024 \_\_\_\_\_
  - c) 1 Terabyte = \_\_\_\_\_ Gigabytes.
3. Priya has been asked to create a poster on "Summer Camp Activities" by her teacher. She wants to apply decorative text and add pictures, shapes and Callouts to the poster. Help her how she can do this.
4. Amit has created a document with several paragraphs. He notices that the Paragraphs Appear with a ragged right edge. What can be do to make the right edge smooth similar to the left edge?

## L.2 Evolution of Computers CBE Based Questions (April)

### Chapter 2

### CBE WORKSHEET

## Evolution of Computers

#### A Fill in the blanks.

1. An abacus is also called a counting frame.
2. The Pascaline calculator was an automatic mechanical calculator.
3. Charles Babbage is known as the 'Father of Computers'.
4. Siri is Apple's voice-controlled personal assistant.

#### B Multiple Choice Questions.

1. Which of the following generations used vacuum tubes?  
(a) First generation  (b) Second generation   
(c) Third generation  (d) All of the above
2. Which of the following is an example of a second-generation of computer?  
(a) ENIAC  (b) EDVAC   
(c) UNIVAC  (d) None of the above
3. Which of the following is a category of Computers?  
(a) Mainframe  (b) Super Computer   
(c) Micro Computers  (d) All of the above
4. Which of the following is an example of fourth-generation computers?  
(a) Desktop  (b) Macintosh   
(c) Both (a) & (b)  (d) None



Write "True" or "False".

1. Abacus is the first calculator. True
2. Palmtop is an example of a microcomputer. True
3. A minicomputer cannot process multiple tasks at a same time. False
4. Supercomputers are the most powerful computers in terms of data processing and speed. True



**Computer CBE Based Questions**  
**Month: June'2024-25**  
**L.5 MORE FEATURES OF WORD-2016**

**CBE WORKSHEET**

**A] Fill in the blanks.**

1. The **Find** option is used to search for a particular word or phrase in a Document.
2. The **navigation** pane appears on the left side of the screen.
3. The **replace all** option is used to replace a word with another word in the entire document.
4. **Line spacing** is the blank space between the lines of a paragraph in a document.
5. **Margin** is the blank space at the sides of a page in a document.

**B] Multiple choice question.**

1. Which of the following tab contains tools to indent a paragraph?  
A] Home  
B] Design  
C] File  
D] None
2. Which of the following is the type of alignment?  
A] left  
B] center  
C] Justify  
D] All of the above
3. Which of the following is used to display the title of a document?  
A] Footer  
B] Title  
C] Header  
D] None
4. Which of the following contains the option to print the document?  
A] Print paper  
B] File  
C] Home  
D] None
5. **Look at the following picture and answer the following questions.**



**Keyboard:** It is used to input data and instructions into the computer. A standard keyboard has 104 keys which are divided into four groups typing keys. Function keys, Navigation keys, and Control keys. Sir Christopher Latham Sholes was the inventor of the QWERTY keyboard.

**Mouse:** It is hand-held pointing device. It is used to control the movement of the pointer to select an object, open files and folders and draw pictures, etc. Dr. Engelbart is the invent the or of the computer mouse.

i) Which type of intend is applied in the above picture?  
**Ans. Increase Intend.**

ii) What is used to replace the word four with three?  
**Ans. Find and Replace Option.**

iii) What type of alignment is applied to the above paragraphs? Name the short cut key.  
**Ans. Align Justify is applied. Shortcut key is Ctrl + J.**

iv) What type of alignment is default alignment applied in MS Word? Name the short cut key.  
**Ans. Align Left. Shortcut key is Ctrl + L.**

v) If Sona wants to increase the line spacing to **1.5 line spacing**, what shortcut will she use?  
**Ans. Ctrl + 5.**

**AIL [ ART INTEGRATED LEARNING ]**

**Creating Invitation Card and Greeting Card. [ Practically to be done ]**





2. A device that communicates the results of data processed by the computer and converts the Digital information into a form that humans can easily read and understood is called
- a) Input
  - b) Monitor
  - c) **Output**
  - d) Keyboard
3. Rahul wants to talk with his friend via video call. Which device should he get attached to your computer system?
- a) **Web cam**
  - b) Pen drive
  - c) CD-ROM
  - d) Digital camera
4. Which type of printer is used by Riya to print architectural blue-prints and engineering designs?
- a) Scanner
  - b) Daisy wheel
  - c) **Plotters**
  - d) Projector
5. Siya is conducting the meeting in large room. She wants to display her PowerPoint presentation on a large screen so, which device she should use to present her presentation?
- a) Monitor
  - b) Printer
  - c) **Projector**
  - d) All of the above

# Computer CBE Based Questions for The Month of Aug-Sept'24.

## L.3 Computer Memory And Storage Device

### CBE Questions

1. Which type of memory is used to store a single character?  
A] DVD  
B] USB  
C] Megabyte  
D] Byte
2. Which of the following uses a blue laser is used to read the disc?  
A] Blu-ray  
B] DVD  
C] CD  
D] None
3. Which of the largest memory unit in digital storage?  
A] Kb  
B] Mb  
C] Tb  
D] Gb
4. Which of the following is used in digital cameras?  
A] Memory card  
B] Pen drive  
C] Both a and b  
D] None
5. Which of the following is type of secondary storage device?  
A] Hard disk  
B] CD  
C] DVD  
D] All of the above