



Delhi Public School Gandhinagar
Academic session (2023-24)

Class: I

Subject: Mathematics

Month: April and May

Chapter- 1 Numbers up to 20

Chapter- 2 Addition up to 20

Month: April and May

By: Ms.Gargi Khatri



- ❖ Bridge Course/ Revision
- ❖ Oral (Numbers 1-20)
- ❖ Notebook Work (Number Names 1-20)

❖ Revision of Numbers

➤ Numbers 1 to 20

T	O		T	O
	1		1	1
	2		1	2
	3		1	3
	4		1	4
	5		1	5
	6		1	6
	7		1	7
	8		1	8
	9		1	9
1	0		2	0



➤ Write number names. (1-10)

T	O	
	1	One
	2	Two
	3	Three
	4	Four
	5	Five
	6	Six
	7	Seven
	8	Eight
	9	Nine
1	0	Ten



➤ Write number names. (11-20)



T	O	
1	1	Eleven
1	2	Twelve
1	3	Thirteen
1	4	Fourteen
1	5	Fifteen
1	6	Sixteen
1	7	Seventeen
1	8	Eighteen
1	9	Nineteen
2	0	Twenty

Chapter- 1 Numbers Up To 20

- ❖ Textbook Work Page No:1,2, 3, 4, 5, 6, 7, 9, 10,11, 12,13,14, 15, 17, 18
- ❖ C.B.E. Worksheet: Textbook Page No:19
- ❖ Notebook work

Numbers 11-20 (Tens and Ones)

T	O				
1	1	1	Ten	1	One
1	2	1	Ten	2	Ones
1	3	1	Ten	3	Ones
1	4	1	Ten	4	Ones
1	5	1	Ten	5	Ones
1	6	1	Ten	6	Ones
1	7	1	Ten	7	Ones
1	8	1	Ten	8	Ones
1	9	1	Ten	9	Ones
2	0	2	Tens	0	Ones

A. Write the number names for the following.

T	O	
	7	Seven
	9	Nine
1	8	Eighteen
2	0	Twenty

B. Write the numbers for the given number names.

	T	O
Three		3
Six		6
Eleven	1	1
Fifteen	1	5

C. Write before number.

4	5
9	10
12	13
18	19

D. Write after number

6	7
10	11
14	15
19	20

E. Write between number.

4	5	6
9	10	11
13	14	15
18	19	20

F. Arrange the numbers from smallest to biggest.

a.

9	15	2
---	----	---

Ans

2	9	15
---	---	----

b.

19	7	12
----	---	----

Ans.

7	12	19
---	----	----



G. Arrange the numbers from biggest to smallest.

a.

13	6	18
----	---	----

Ans

18	13	6
----	----	---

b.

11	8	20
----	---	----

Ans

20	11	8
----	----	---



Chapter –2 Addition up to 20

- ❖ Textbook Work Page No:20, 21, 22, 23, 24, 25, 26, 27, 28, 29,30, 31, 32, 33
- ❖ C.B.E. Worksheet: Textbook Page No:34


1 + 2 = 3

❖ Notebook work

A. Count and add.

a.		$2 + 2 = 4$
b.		$3 + 4 = 7$
c.		$1 + 2 = 3$

B. Add the following. (Vertical Addition)



	T	O
		6
+		4
	1	0

	T	O
		9
+		5
	1	4

	T	O
		3
+		5
		8

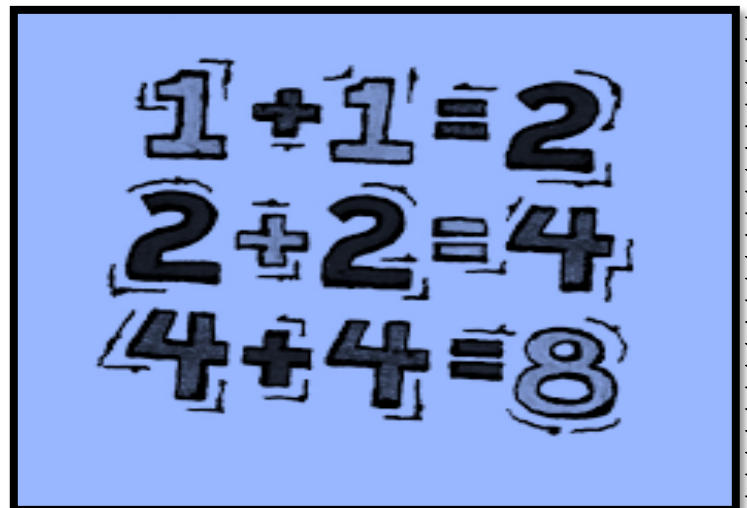
	T	O
		3
+		8
	1	1

	T	O
		7
+		6
	1	3

	T	O
		7
+		2
		9

C. Add the following. (Horizontal Addition)

$4 + 3 = 7$
$5 + 5 = 10$
$8 + 1 = 9$
$3 + 1 + 5 = 9$
$7 + 1 + 1 = 9$
$4 + 2 + 3 = 9$



D. Add the following. (Vertical Addition)

	T	O
		2
		1
+		4
		7

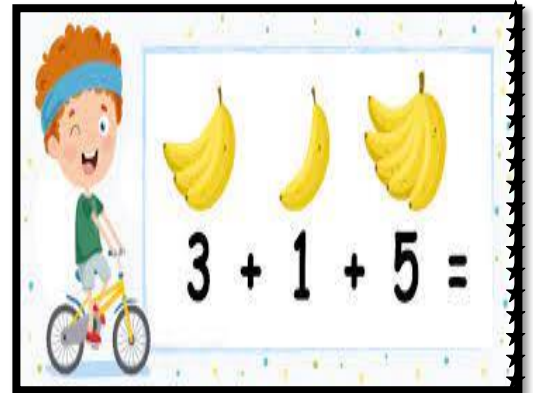

	T	O
		1
		5
+		2
		8

	T	O
		2
		1
+		6
		9

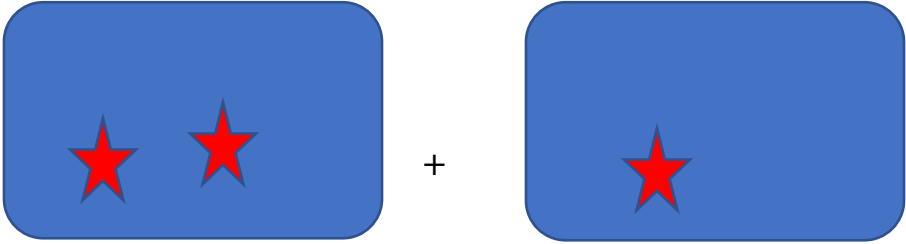
	T	O
		3
		0
+		3
		6

	T	O
		2
		3
+		4
		9


	T	O
		4
		2
+		1
		7



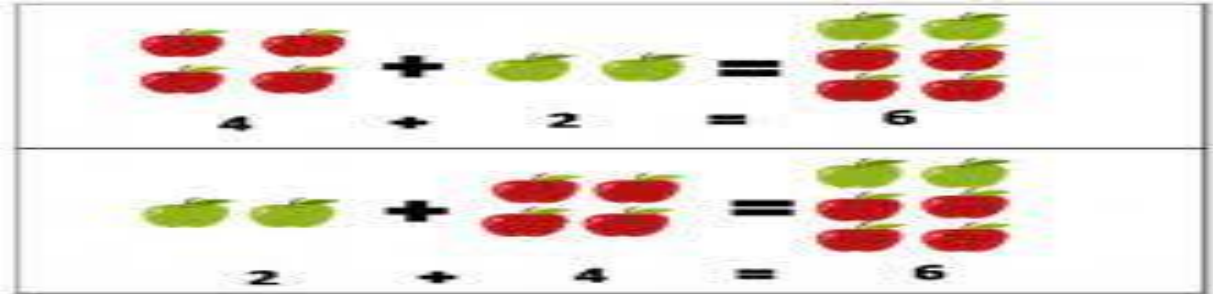
E. Order property in addition. (Activity)



$$2 + 1 = 3$$



$$1 + 2 = 3$$



Remarks. _____

Sign. _____